

Strand : LIFE

Unit : HUMAN BEING

Chapter 10. Human Body System: Respiratory System and Circulatory System

Chapter Objectives

Students will be able to understand the main organs and its function of respiratory system and circulatory system in the human body system.

Topic Objectives

10.1 Respiratory System

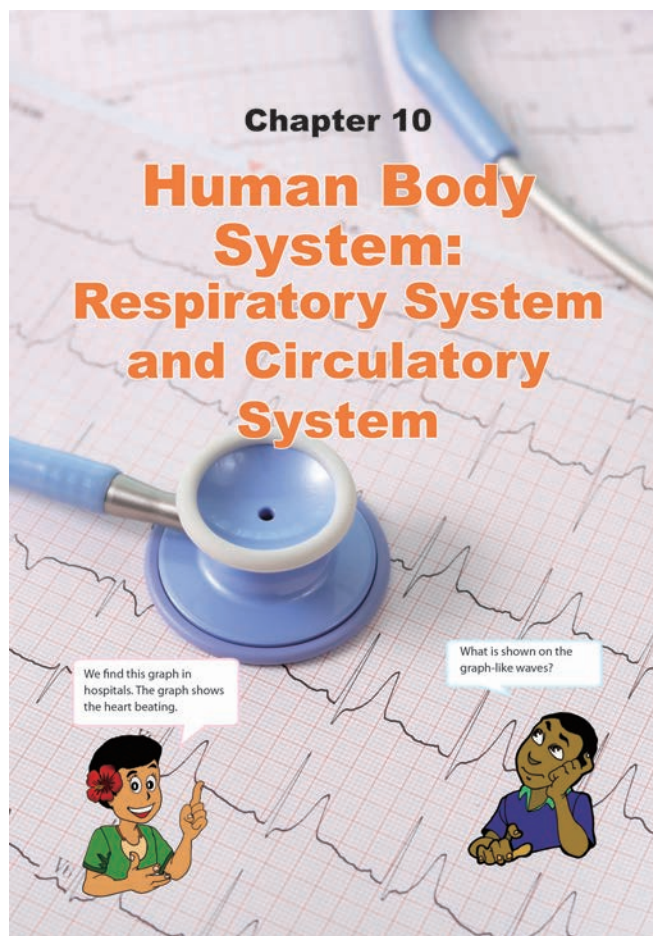
Students will be able to;

- Describe the function of the major organs of the respiratory system such as trachea, lungs and alveoli.
- Explain how air moves in and out of the lungs through observing a lung model.

10.2 Circulatory System

Students will be able to;

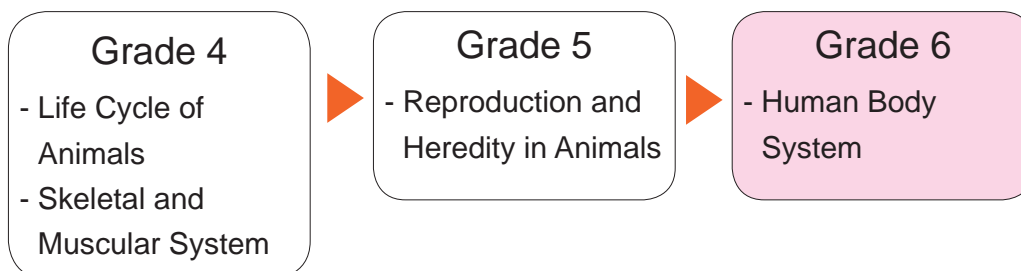
- Describe the structure and function of the heart.
- Explain how blood flows in the human body through the blood vessels.
- Describe the components of blood such as red cells, white cells and platelets and its functions.



This picture is from the chapter heading of the textbook showing a graph of the heart beating called a 'cardiograph' and a stethoscope.

Related Learning Contents

The learning contents in this chapter connect to the following chapters.



Prior knowledge for learning this chapter;

- Structure of the human bones and muscles and how bones and muscles work together.
- Structure and function of male and female reproductive systems.

Teaching Overview

This chapter consists of 8 lessons, each lesson is a double period.

Topic	Lesson No.	Lesson Title and Key Question	Content standard in syllabus	Textbook page number
10.1 Respiratory System	1	Breathing How does air move in and out of our body?	6.1.3	139 - 140
	2	Lungs What are the functions and structures of lungs?		141 - 142
	3	Summary and Exercise		143 - 144
10.2 Circulatory System	4	The Heart What does the heart do?		145 - 146
	5	Circulation of Blood How does blood flow through the body?		147 - 148
	6	Blood How does blood carry oxygen and carbon dioxide?		149 - 150
	7	Summary and Exercise, Science Extras		151 - 153
Chapter Test	8	Chapter Test		

Lesson Flow

1 Introduction (5 min.)

- Recap Gr 3 Chapter 4 'Characteristics of Animals'. State that breathing is a characteristic of animals where air is taken in through lungs or gills and ask:

Q:How do fish breathe in water? (They use their gills to breathe in water.)

Q:What about animals that live on land? (They take in air through their lungs)

Q:Why do we keep breathing? (To be alive)

- Express that air is very essential in life and without air there is no life.

2 Introduce the key question

How does air move in and out of our body?

3 Activity (35 min.)

- Organise students in groups.
- Explain the steps of the activity.
- Remind students to observe the colour of the limewater carefully after shaking.
- Have students do the activity and record their result.
- Ask them to discuss the results in their groups.

4 Discussion for findings (25 min.)

- Ask students to present their results from the activity.
 - Write their results on the blackboard.
 - Facilitate active students' discussions.
- (Continue)

10.1 Respiratory System

Lesson 1 Breathing

- We cannot live without air. When we breathe, we take in and give out air.
- ?** How does air move in and out of our body?
- Activity : What is contained in exhaled air?**

What We Need:
• limewater, two clear plastic bags

What to Do:

 - Fill a plastic bag with air around you. Pour the limewater into it and tie the mouth of the plastic bag tightly. Shake it well and observe what happens to the limewater. Record your observations.
 - Blow up another plastic bag with your exhaled air. Pour limewater into it and tie the mouth of the plastic bag tightly. Shake it well and observe what happens to the limewater. Record your observations.
 - Share your findings with your classmates. Discuss what is contained in the exhaled air.
- Result**

We found out that limewater with air did not change its colour. On the other hand, the limewater with the exhaled air turned cloudy. From this result, exhaled air contained more carbon dioxide than the air.

Carbon dioxide turns limewater cloudy!

Air Exhaled air

139

Teacher's Notes

- In Grade 3 Chapter 4, 'Characteristics of Animals' students learnt about breathing as a characteristic of animals in which animals that live on land breathe in through their lungs while those that live in water take in air through their gills.
- Lungs expand and contract, supplying life-sustaining oxygen to the body and removing a waste product called carbon dioxide.
- Breathing starts at the nose and mouth. The inhaled air goes into the nose or mouth, and it travels down the back of your throat and into the windpipe or trachea and finally into the lungs.

How to prepare lime water

- Fill up 500ml container with water.
- Add 1 table spoon lime.
- Shake the solution well.
- Leave the solution to settle overnight so sediments settle at the bottom of the container.
- Gently pour out the solution without sediments in to a cup.
- Shake the solution for 1 minute and blow.

Tips of the Activity

- Limewater must be prepared a night prior to the lesson.
- Pour out limewater into a cup from the 500ml container.
- Tie the plastic bags tightly so it doesn't spill when shaking.
- Be careful not to allow students to taste or drink the limewater.
- Plastic bag with exhaled air will be cloudy as it indicates carbon dioxide is present.

NOTE: Limewater is used to test for presence of carbon dioxide in breath.

Lesson Objectives

Students will be able to:

- Understand what breathing is.
- Identify how organs work in the respiratory system.
- Observe the change of colour of the limewater with exhaled air.

Assessment

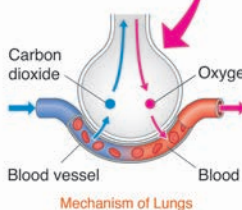
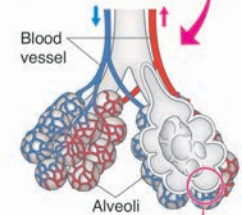
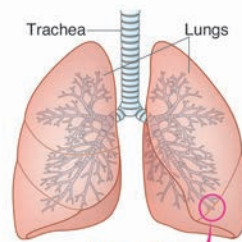
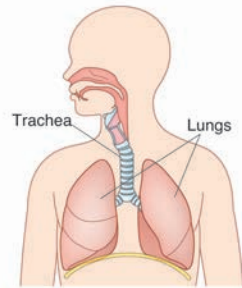
Students are able to:

- Explain what kinds of gas are exchanged during breathing.
- Describe the name of the organs and their work in the respiratory system.
- Illustrate their ideas freely in the change of colour of the limewater with exhaled air.

Summary

Breathing is the process of moving air in and out of the body. When we breathe, we take in oxygen and give out carbon dioxide.

The group of organs in our body that enables us to breathe is called the **respiratory system**. An **organ** is a special part of the body that has a specific form and function. Eyes, ears, brain and heart are examples of organs. The major organs of the respiratory system are nose, trachea, alveoli and lungs. When we breathe in, we take air into our body through our nose. The air moves into our **trachea**, which connects the throat to the **lungs**. In the chest, the trachea is divided into two tubes and each of these tubes leads to one of the two lungs. Each tube is divided into smaller tubes that end in millions of tiny balloon-like air sacs which are called **alveoli**. In the alveoli, oxygen is transferred to the blood. Blood carries oxygen to all parts of our body. At the same time, carbon dioxide is transferred from the blood to the alveoli. When we breathe out, our body gets rid of carbon dioxide.



5

- **Based on their results**, ask these questions as discussion points.

Q: Is the exhaled air the same as or different from the air? (It is different from air)

Q: Why do you think so? (The colour of the limewater in air is different from that in exhaled air.)

Q: Carbon dioxide turns the limewater cloudy. Which of the two, air or exhaled air has more carbon dioxide? (Exhaled air.)

Q: What do you understand from the result of this activity? (When we breathe out, we give out carbon dioxide. When we breathe in, we take in oxygen)

- Conclude the discussions.

5 Summary (15 min.)

- Ask students to open their textbooks to the summary page and explain.
- Summarise today's lesson on the blackboard.
- Ask these questions as assessment:
 - Q: What is breathing?
 - Q: What is the respiratory system?
 - Q: What are the main organs of respiratory system?
 - Q: What air do we take in and give out when we breathe?
- Ask students to copy the notes on the blackboard into their exercise books.

140

Sample Blackboard Plan

Title:

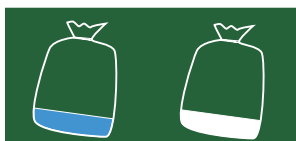
Breathing

Key question:

How does air move in and out of our body?

Activity:

What is contained in exhaled air?



Air

Exhaled air

Discussion

Q: Is the exhaled air the same as or different from the air? **It is different from air.**

Q: Why do you think so?

The colour of the limewater in air is different from that in exhaled air.

Q: Carbon dioxide turns the limewater cloudy. Which of the two, air or exhaled air has more carbon dioxide? **Exhaled air**

Q: What do you understand from the result of this activity? **When we breathe out, we give out carbon dioxide. When we breathe in, we take in oxygen.**

Summary

- **Breathing** is the process of moving air in and out of the body.
- When we breathe, we take in oxygen and give out carbon dioxide.
- A group of organs in our body that enables us to breathe is called the **respiratory system**.
- An organ is a special part of the body that has a specific form and function.
- The major organs of the respiratory system are **nose, trachea, alveoli and lungs**

a plastic bottle with the end cut off,
a balloon, a balloon with the half cut off

Lesson Flow

1 Introduction (5 min.)

- Revise previous lesson by asking:
Q:How does air move into our body?
Q:What is contained in exhaled air?
- Explain that lungs are the main organs of respiratory system and ask the question:
Q:How does the lung work?

2 Introduce the key question

What are the functions and structures of lungs?

3 Activity (35 min.)

- Organise students in groups.
- Explain the steps of the activity.
- Remind students to gently pull and let go of the piece of rubber.
- Have students to do the activity and record their observations on their exercise books.
- Ask students to discuss their findings and how lungs work when breathing by comparing the lung model and the figure in their groups.
- Give enough time to the students to find new ideas through the activity by themselves.

4 Discussion for findings (25 min.)

- Ask students to present their findings from the activity.
- Write their findings on the blackboard.
- Facilitate active students' discussions.
- Confirm the findings with the students.
(Continue)

Lesson 2 Lungs

- 1 Lungs are the main organs of the respiratory system. How do the lungs work? What structures do lungs have?

- 2 ? What are the functions and structure of lungs?

3 Activity : Making a lung model

What We Need:

- a plastic bottle with the end cut-off, a balloon, a balloon with the half cut-off



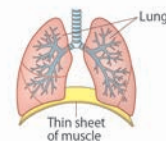
What to Do:

- Push the balloon into the neck of the bottle and fold its end around the neck of the bottle.
- Place the half cut-off over the open end of the bottle.
- Pull on the middle of the half-cut balloon and let go. Observe what happens.
- Gently push in the half-cut balloon as shown on the right. Observe and record what happens.
- Think about the question below based on your observations.



The figure below shows the structure of the lungs. Which parts of the lung are represent in lung model?

- Share your findings with your classmates. Describe how the lungs work when breathing.



Teacher's Notes

The act of breathing has two stages – inhalation and exhalation

- Inhalation – the intake of air into the lungs through expansion of chest volume.
- Exhalation – the expulsion of air from the lungs through contraction of chest volume.
- Inhalation and exhalation involves muscles, which is called diaphragm muscle

Diaphragm muscle

1. During inhalation – the muscles contract:

- Contraction of the diaphragm muscle – causes the diaphragm to flatten, thus enlarging the chest cavity. The chest cavity expands, thus reducing air pressure and causing air to be passively drawn into the lungs. Air passes from the high pressure outside the lungs to the low pressure inside the lungs.

2. During exhalation – the muscles relax:

- The muscles are no longer contracting, they are relaxed.
- The diaphragm curves and rises, the ribs descend and chest volume decreases.

Lung model

- Balloon represents lungs
- The cut out rubber is the muscle (diaphragm)
- Pulling the cut balloon shows breathing in (inhalation).
- Pushing the cut balloon shows breathing out (exhalation)

Lesson Objectives

Students will be able to:

- Identify the body parts that help human breathe.
- Describe the ways that human breathe in and out.
- Communicate their ideas to others.

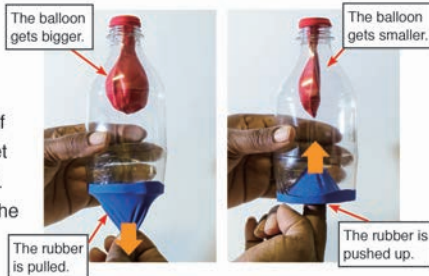
Assessment

Students are able to:

- State lungs and diaphragm as the main body parts of breathing.
- Explain how lungs and diaphragm work together when breathing by comparing the lung model.
- Express their opinions during discussion.

Result

We found out that when we pulled on the middle of the half-cut balloon and let go, the balloon got bigger. When we gently pushed the half-cut balloon up, the balloon got smaller.



Summary

The balloon represents the lungs, and the balloon with the half-cut represents the thin sheet of muscle!

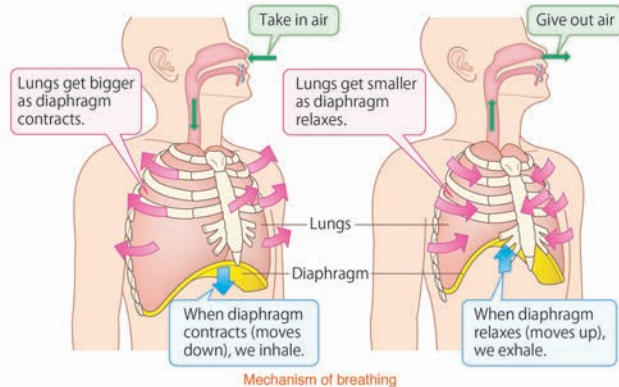


5

As we breathe, we have a special muscle that helps our lungs move. The muscle is called the **diaphragm**. It makes our lungs larger and smaller as we breathe in and out.

When we inhale, the diaphragm contracts and moves down in our chest. This causes our lungs to become bigger and allows air to come into our lungs.

As we exhale, the diaphragm relaxes and moves up towards the lungs, this causes our lungs to become smaller and air is forced out of our lungs.



142

- **Based on their findings**, ask these questions as discussion points.

Q: Which part of the lung model represents the lungs? (The balloon)

Q: Which part of the lung model represents the thin sheet of muscle? (The half cut-off balloon)

Q: What is the work of the sheet of muscle? (It changes the size of lungs, etc)

Q: How does the sheet of muscle move? (It goes up and down, etc.)

Q: Can you guess what happens to the sheet of muscle when we breath in or out? (It moves down when we breath in and moves up when we breath out.)

- Conclude the discussions.

5 Summary (15 min.)

- Ask students to open their textbooks to the summary page and explain.
- Summarise today's lesson on the blackboard.
- Ask these questions as assessment:
 - Q: What helps lungs become bigger and smaller?
 - Q: Which body parts help us breathe?
 - Q: How does the diaphragm help when we breath in and out?
- Ask students to copy the notes on the black board into their exercise books.

Sample Blackboard Plan

Title:

Lungs

Key question:

What are the functions and structure of lungs?

Activity : Making a lung model

Results:

1. What happens to the balloon when we pull the centre of the rubber out?
The balloon gets bigger.
2. What happens to the balloon when we push the centre of the rubber in?
The balloon gets smaller.

Discussion

Q: Which part of the lung model represents the lungs or the thin sheet of muscle?

The lungs: The balloon

The sheet of muscle: The half cut-off balloon

Q: What is the work of the sheet of muscle?

It changes the size of lungs, etc

Q: How does the sheet of muscle move?

It goes up and down, etc.

Q: Can you guess what happens to the sheet of muscle when we breath in or out? **It moves down when we breath in and moves up when we breath out.**

Summary

- **Lung** is a respiratory organs, situated inside the rib cage, that transfer oxygen into the blood and remove carbon dioxide from it.
- **Diaphragm** is a special muscle that helps our lungs to move.
- When inhaling, the diaphragm moves down. This causes lungs to become bigger and allows air to come into lungs.
- When exhaling, the diaphragm moves up. This causes lungs to become smaller and air is forced out of the lungs.

Lesson
3 / 8

Lesson Title
Summary and Exercise

Tips of lesson

1 Summary (40 min.)

- Recap the main learning contents covered in this topic.
- Base on the main learning contents ask students the following questions.
 - What is a respiratory system?
 - What are the major organs of the respiratory system?
 - How does breathing take place?
- Explain and correct the learning contents if they still have misconceptions.
- Verify their understanding with the summary points.
- Allow students to read aloud the main ideas of the topic and then copy into their exercise books.

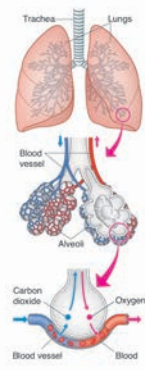
2 Exercise & Explanation (40 min.)

- Go through the instructions of the exercise.
- Allow the students to answer the questions individually and give them enough time to respond to the questions based on their understanding.
- After the exercise give them the answers to the questions and explain how to solve them using their scientific understanding and ideas.
- Make reference to the textbook or provide clear examples in daily life to strengthen the learnt concepts in this topic.

1 Summary 10.1 Respiratory System

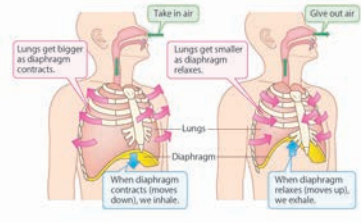
Breathing

- The group of organs in our body that enables us to breathe is called the respiratory system.
- The major organs of the respiratory system are nose, trachea or windpipe, alveoli and lungs.
- When we breathe, we take in oxygen and give out carbon dioxide.
- The air moves into our trachea, which connects the throat to the lungs.
- In the alveoli, oxygen is transferred to the blood which is carried to all parts of our body.



Lungs

- Diaphragm is the muscle that makes our lungs larger and smaller for the action of breathing.
 - Lungs get bigger as the diaphragm contracts and the air comes in our lungs when we inhale.
 - Lungs get smaller as the diaphragm relaxes and the air is forced out of our lungs when we exhale.



143

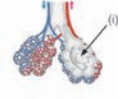
2 Exercise 10.1 Respiratory System

Q1. Complete each sentence with the correct word.


- The process of moving air in and out of the body is called _____.
- An _____ is a special part of a body that has a specific form and function.
- The group of organs in our body that enable us to breathe is called the _____ system.
- The muscle that makes our lungs larger and smaller during breathing is called the _____.

Q2. Choose the letter with the correct answer.

- What are the major organs of the respiratory system?
 - Eyes, ears and mouth
 - Nose, trachea and heart
 - Trachea, lungs and oxygen
 - Nose, trachea and lungs
- What is the correct name of the organ labeled (i) shown in the diagram on the right?
 - Heart
 - Trachea
 - Alveoli
 - Diaphragm



Q3. How does the diaphragm help the lungs to move when breathing?



Q4. Name the gas that we breathe in and how it moves through the main organs of the respiratory system.

144

Exercise answers

Q1.

- (1) **breathing**
- (2) **organ**
- (3) **respiratory**
- (4) **diaphragm**

Q2.

- (1) **D**
- (2) **C**

Q3. Expected answer

Lungs gets bigger as diaphragm contracts and air comes into our lungs as we inhale. Lungs get smaller as diaphragm relaxes and air is forced out of our lungs as we exhale.

Q4. Expected answer

When we breathe in, we take in oxygen into our body through our nose. The air moves into our trachea, which connects the throat to the lungs. In the chest, the trachea divides into two tubes and each of these tubes leads to one of your two lungs.

Lesson Flow

1 Introduction (5 min.)

- Review previous lesson by asking:
Q:Which organ in our body helps us to breathe in air and how does it function?
- Based on their experiences also pose a question.
Q:What kind of physical exercise do you do at home? Walking, running, jumping.
- Provoke students to think by asking:
Q:How would you feel after taking part in a long running race? Heart beats so fast.
Q:How can you feel your heart beat?

2 Introduce the key question

What does the heart do?

3 Activity (35 min.)

- Organise students in pairs.
- Explain the steps of the activity.
- Assist students to find their pulse on their wrists.
- Ask students to measure their pulse rates at rest and after exercise for 15 seconds.
- Demonstrate how to calculate pulse rate using the formula.
- Have students to calculate their pulse rates in their groups.

4 Discussion for findings (25 min.)

- Ask students to present their pulse rates from the activity.
- Write down their pulse rates on the black board. (Continue)

10.2 Circulatory System

Lesson 1 The Heart

1 After a heavy exercise, we can feel the beat of our heart on our chest.

2 **?** What does the heart do?

3 **Activity : Measuring your pulse rate**

What to Do:

- Draw a table like the one shown below.

	Pulse	
	Beats in 15 seconds	Beats in 1 minute
At rest		
After exercise		

- Take your pulse for 15 seconds and count the number of beats while at rest. Record your pulse rate in the table.
- Jump at the same spot for one minute, then take your pulse for 15 seconds. Record your pulse rate in the table.
- Calculate your pulse rate for one minute using the formula;

$$\boxed{\text{The number of beats in 15 seconds}} \times 4 = \boxed{\text{The number of beats in 1 minute}}$$

- Record your pulse rate for one minute in the table.
- Share your findings with your classmates. Discuss:
 - How your pulse rate changed before and after the exercise.
 - Why your pulse rate increased after the exercise.
 - How your breathing rate was like before and after the exercise.

145

Teacher's Notes

Tips of the Activity

- To check your pulse at your wrist, place two fingers between the bone and the tendon over your radial artery — which is located on the thumb side of your wrist. When you feel your pulse, count the number of beats.
- Allow students to work out their pulse and breathing rates using the formula given and record in the table.
- Make sure every child can be able to feel their pulse before the activity is carried out.

How do you measure your breathing rate?

- The respiration rate is the number of breaths a person takes per minute. The rate is usually measured when a person is at rest and simply involves counting the number of breaths for one minute by counting how many times the chest rises.
- The person's breathing is likely to change if he or she knows you are counting it.
- What are respirations? Respirations are when you breathe in and out. Your respiratory, or breathing rate is the number of times you breathe in and out in 1 minute. Most people breathe in and out 12 to 20 times every minute.

Lesson Objectives

Students will be able to:

- Understand what a heart is.
- Identify the structures of a heart.
- Measure their pulse rates.

Assessment

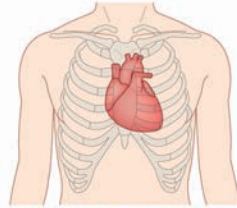
Students are able to:

- Describe the functions and the structure of the heart.
- List the different parts of the heart.
- Use the formula to calculate the pulse rate for one minute.

Summary

The **heart** is an important organ in the human body. It is about the size of our fist and is located within our rib cage to the left of the centre of the chest.

The heart is made of a muscle called the heart muscle. We can control our arm and leg muscles, but we cannot control the heart muscle. This muscle in our heart works all the time even while we are sleeping.

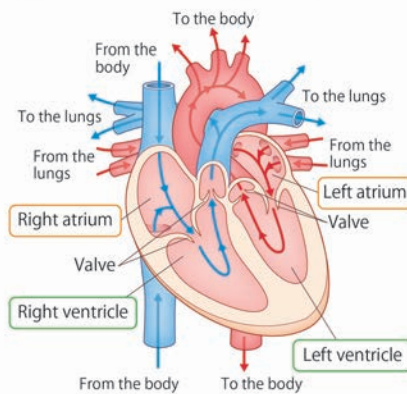


The heart is located to the left of the centre of the chest.

The heart pumps thousands of litres of blood to all parts of our body every day. The heart has four spaces which are called **chambers**. These are called the left and right **atria** and the left and right **ventricles**.

The atrium is a chamber that receives blood from the body and the lungs, and the ventricle is a chamber that pumps blood to the lungs and the body. Between the chambers there are valves. The valves open and close to control the movement and direction of blood flow.

When ventricles contract, blood is forced out of the heart. We can feel this contraction as a pulse. During physical exercise, more oxygen is needed in the muscles so the blood must carry oxygen to the muscles faster than when the body is at rest. To meet these demands the pulse rate increases.



5

- Facilitate active students' discussions.
- Confirm their pulse rates with other students.
- **Based on their findings**, ask these questions as discussion points.

Q: How did your pulse rate change before and after the exercise? (The pulse rates increased after exercise.)

Q: Why did your pulse rate increase after the exercise? (Because the number of the heartbeats increased.)

Q: How was your breathing rate like before and after the exercise? (Before the exercise the breathing rate was slow and after the exercise it was faster.)

- Conclude the discussions.

5 Summary (15 min.)

- Ask students to open their textbooks to the summary page and explain.
- Summarise today's lesson on the blackboard.
- Ask these questions as assessment:
 - Q: What is the heart made of?
 - Q: How many chambers does the heart have?
 - Q: What are atria and ventricles?
 - Q: Why does the pulse rate increase during exercise?
- Ask students to copy the notes on the blackboard into their exercise books.

146

Sample Blackboard Plan

Title:

The heart

Key question:

What does the heart do?

Activity:

Measuring your pulse rate

Result:

	Pulse	
	15 sec	1 min
At rest	18	72
After exercise	30	120

Discussion

Q: How did your pulse rate change before and after the exercise?

The pulse rates increased after exercise.

Q: Why did your pulse rate increase after the exercise?

Because the number of the heartbeats increased.

Q: How was your breathing rate like before and after the exercise?

Before the exercise, the breathing rates was slow and after the exercise it was faster.

Summary

- The heart is an important organ in our body.
- The heart is made of a muscle called the heart muscle.
- The heart pumps thousands of litres of blood to all parts of our body.
- The heart is made of four chambers called left and right atria and the left and right ventricles.
- The atrium is a chamber that receives blood from the body or the lungs.
- The ventricle is a chamber that pumps blood to the lungs or the body.

Lesson Flow

1 Introduction (5 min.)

- Review the previous lesson by asking:
Q: Why does your pulse rate increase after an exercise?
Q: What is the function of the heart?
- Provoke students thinking about the flow of blood in the human body by asking:
Q: How does blood flow in the human body?

2 Introduce the key question

How does blood flow through the body?

3 Activity (35 min.)

- Organise students in groups.
- Explain the steps of the activity.
- Demonstrates how each student will take turn to observe the blood flow of a fish using the microscope.
- Remind students to observe carefully the direction of the blood flow.
- Ask students to do the activity by referring to the characters in the textbook.
- Give them enough time to sketch the flow of blood in their exercise books.
- Ask students to discuss their findings in their groups.

4 Discussion for findings (25 min.)

- Ask students to present their findings from the activity.
(Continue)

Lesson 2 Circulation of Blood

1 The heart pumps blood to all parts of our body everyday.

2 **?** How does blood flow through the body?

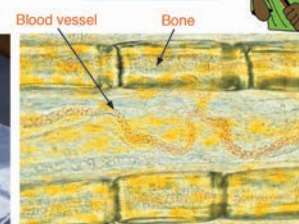

3 **Activity : Observing the blood flow**

What We Need:

- small live fish, small ziplock bag, microscope

What to Do:

- Put the live fish into a ziplock bag with water.
- Put the ziplock bag with fish on the stage of the microscope and observe the flow of blood in the tail fin through the microscope.
- Sketch the flow of blood and record your observations in your exercise book.
- Share your findings with your classmates. Discuss about:
 - What you found in the tail fin.
 - The direction of the blood flow.
 - The thickness of the tubes that the blood is flowing through.



Microscopic view showing blood vessel in a fish.

Teacher's Notes

Tips of the Activity

- If microscope or appropriate fish are not available teacher can use the picture in the text book to do the activity in this lesson.
- A mosquito fish can be used for this experiment and the fish should be released straight after the experiment.
- The lens of the microscope should be directly on the fishtail.
- Students can try to identify blood vessels using the microscope if possible.
- The blood circulatory system is also called the cardiovascular system, an organ system that permits blood to circulate and transport nutrients, oxygen, carbon dioxide, hormones, and blood cells to and from the cells in the body. It consists of the heart and the blood vessels running through the entire body. The two blood vessels are called the arteries and veins. The arteries carry blood away from the heart and the veins carry blood back to the heart. The artery and the vein branches out into smaller vessels called the capillaries. Capillaries are the smallest of the body's blood vessels; they connect the arteries and the veins. The capillaries have an important function where the exchange of materials between the cells occur.
- Animals that live in water take in air through their gills instead of lungs. As water passes over the gills of fish, oxygen that is present in the water is absorbed into the blood vessels through the gills. Carbon dioxide is removed from the blood vessels through the gills and it gets mixed with the water and flows out the gills.

Lesson Objectives

- By the end of the lesson students will be able
- Understand the circulatory system.
 - Understand how blood flows through the body.
 - Observe the blood flow in a live fish using a microscope.

Assessment

- Students are able to:
- Explain how different organs such as the heart, blood and blood vessels works together.
 - Explain the ways that blood flow through the different types of blood vessels.
 - Handle a microscope in the appropriate ways.

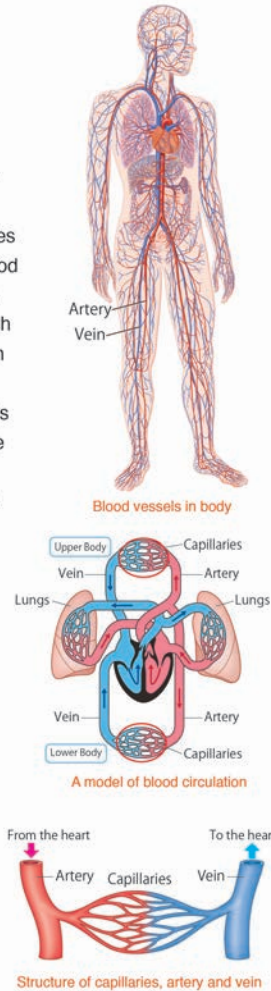
Summary

Blood flows through tubes to get to the different parts of our body. These tubes are called **blood vessels**. There are two types of blood vessels; an artery and a vein. **Artery** is the blood vessel that carries blood away from the heart. **Vein** is the blood vessel that carries blood back to the heart. The heart pumps blood to the lungs through the arteries, and the blood picks up oxygen from the lungs. The blood rich in oxygen flows into the heart through the veins and is pumped to all parts of the body through the arteries.

The arteries are divided into smaller tubes and end in tiny blood vessels which are called **capillaries**. The capillaries connect the arteries and veins.

The blood in the capillaries passes the oxygen to and picks up carbon dioxide from the cells. A **cell** is the basic unit that makes up all living things. After passing capillaries, blood flows through the veins. The blood in the veins have little oxygen. It enters the heart and goes to the lungs again to pass carbon dioxide to and picks up oxygen from the lungs. A network of organs such as the heart, blood and blood vessels that transport oxygen and nutrients to and carbon dioxide from the cells is called a

circulatory system.



5

- Write their findings on the blackboard.
- Facilitate active students' discussions.
- Confirm the findings with students.
- **Based on their findings**, ask these questions as discussion points

Q:What did you find in the tail fin? (small bones, tubes, blood)

Q:In which direction did the blood flow? (The blood in a tube flows in the same direction.)

Q:Was the thickness of the tubes that the blood is flowed through different or the same? (They are different.)

Q:Where was the blood flowing from? (From the heart)

Q:How does the blood flow through the body? (The blood flows through the tubes from the heart to all parts of body.)

- Conclude the discussions.

5 Summary (15 min.)

- Ask students to open their textbooks to the summary page and explain.
- Summarise today's lesson on the blackboard.
- Ask these questions as assessment:
 - Q: What is a circulatory system?
 - Q: What are the two main blood vessels?
 - Q: How does blood flow in the body?
 - Q: What is the main function of the blood?
- Ask students to copy the notes on the blackboard into their exercise books.

148

Sample Blackboard Plan

Title:

Circulation of the blood

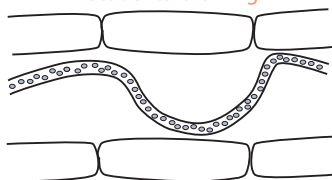
Key question:

How does blood flow through the body?

Activity: Observing the blood flow.

Sketch:

Students' drawing



Discussion

Q: What did you find in the tail fin? **small bones, tubes, blood**

Q: In which direction did the blood flow? **The blood in a tube flows in the same direction.**

Q: Was the thickness of the tubes that the blood is flowed through different or the same? **They are different.**

Q: Where was the blood flowing from? **From the heart.**

Q: How does the blood flow through the body? **The blood flows through the tubes from the heart to all parts of body.**

Summary

- Blood flows through **blood vessels**.
- There are two types of blood vessels; an **artery** and a **vein**.
- Artery is the blood vessel that carries blood away from the heart.
- Vein is the blood vessel that carries blood back to the heart.
- Tiny blood vessels are called **capillaries**.
- Blood flows through:
 - Heart → Lungs → Heart → Artery
 - All body → capillaries → veins → heart
 - Lungs...

Lesson
6 / 8

Lesson Title

Blood

Preparation

nil

Lesson Flow

1 Introduction (5 min.)

- Review the previous lesson by asking:
Q: How does blood flow in the body?
Q: What are the two main blood vessels?
- Encourage students to think about the blood by asking:

Q: What is the blood made of?

2 Introduce the key question

How does blood carry oxygen and carbon dioxide?

3 Activity (35 min.)

- Organise students in pairs or in groups.
- Explain the steps of the activity.
- Allow students to study the picture and the character in the textbook.
- Have students do the activity.
- Give enough time for students to do their findings.
- Ask students to discuss their ideas in their groups

4 Discussion for findings (25 min.)

- Ask students to present their findings from their activity.
- Write their findings on the blackboard.
- Facilitate active students' discussions.
- Confirm their findings with the students
(Continue)

Lesson 3 Blood

- 1** The blood passes oxygen to the cells and picks up carbon dioxide from the cells.

- 2** **?** How does blood carry oxygen and carbon dioxide?

3 **?** **Activity : Components of blood**

What to Do:

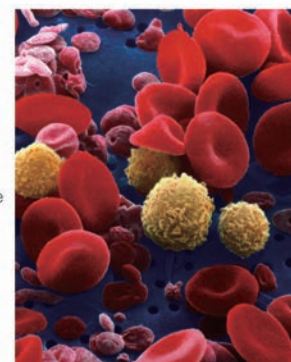
1. Draw a table like the one shown below.

Sketch	Its characteristics

2. Study the close-up photograph of blood below taken by an electronic microscope and identify the different types of particles.

3. Sketch them and record the characteristics of each type of particle in the table.

4. Share your ideas with your classmates. Discuss about:
(1) The number of each type of particles you find.
(2) The characteristics of each type of particles.



Is blood a solid or a liquid? Can you guess what blood consists of?

Teacher's Notes

Composition of blood: Blood consists of two main components, plasma and formed elements.

Plasma is a clear extracellular fluid. It is a mixture of proteins, enzymes, nutrients, wastes, hormones and gases. It carries formed elements.

Formed elements are enclosed in a plasma and have a definite structure and shape. Formed elements are erythrocytes, also known as red blood cells (RBCs), leukocytes, also known as white blood cells (WBCs) and platelets.

Function of Blood: Blood has three main functions, transportation, protection and regulation.

Transportation: Blood transports gases such as oxygen (O₂) and carbon dioxide (CO₂), nutrients, waste products, hormones and heat.

Protection: Blood takes several roles in inflammation. For instance, leukocytes or white blood cells destroy invading microorganisms and cancer cells. Antibodies and other proteins destroy pathogenic substances. Platelets initiate blood clotting and help minimise blood loss.

Regulation: Blood helps regulate pH by interacting with acids and bases and water balance by transferring water to and from tissues.

Lesson Objectives

Students will be able to:

- Identify the components of blood.
- Understand the characteristics of each blood particles.

Assessment

Students are able to:

- List the different components of the blood such as red cells, white cells, platelets and plasma.
- Describe how red cells, white cells, platelets and plasma work in blood.

Summary

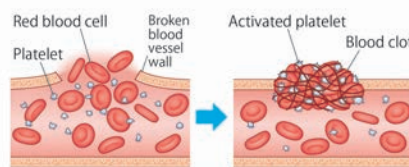
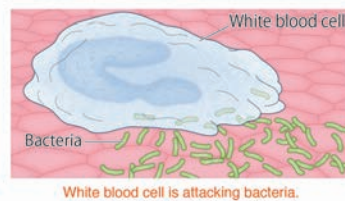
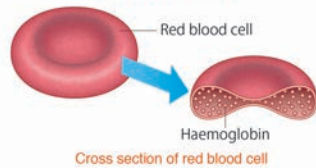
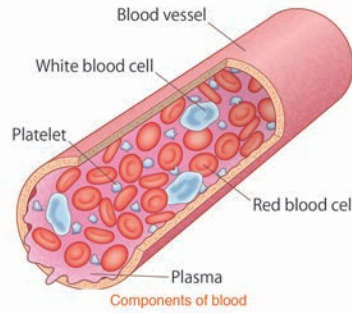
Blood carries oxygen, carbon dioxide, nutrients and wastes in our body. Blood is made up of solid and liquid parts. The solid parts of the blood are suspended in liquid.

The solid parts of the blood include **red cells, white cells** and **platelets**. The liquid part of the blood is called **plasma**.

The red blood cells are disc shaped and they contain **haemoglobin**. Red blood cells use the haemoglobin to carry oxygen from the lungs through all parts of the body.

White blood cells are an important part of the body's immune system. They defend the body against bacteria, viruses and other infectious diseases.

Platelets help blood clot in order to stop bleeding, to heal cuts and other injuries. Plasma is the main component of blood and mostly consists of water. Plasma carries nutrients and water to the cells and carries away wastes such as carbon dioxide from the cells.



5

- **Based on their findings**, ask these questions as discussion points.

Q: How many types of particles did you find?
(Three types of particles)

Q: What are the characteristics of each particle?

1. Red particles (red cells): It is a red-coloured particle, its shape is like a disc, it has dint, etc...
2. White particles (white cells): It is a white-coloured particle, its shape is like a ball, it has a rough surface.
3. Pink particles (Platelets): It is a white-pink coloured particle, it's smaller than other particles, etc...

- Conclude the discussions.

5 Summary (15 min.)

- Ask students to open their textbooks to the summary page and explain.
- Summarise today's lesson on the blackboard.
- Ask these questions as assessment:

Q: What are the components of the blood?

Q: What are the characteristics of red cells, white cells, platelets and plasma?

- Ask students to copy the notes on the blackboard into their exercise books.

150

Sample Blackboard Plan

Title: Blood

Key question: How does blood carry oxygen and carbon dioxide?

Activity: Components of blood

Sketch	Its characteristics
	red colour, its shape is like a disc
	white colour, its colour is like a ball
	white-pink, it's smaller in size

Discussion

Q: How many types of particles did you find?

Three types of particles

Q: What are the characteristics of each particle?

1. Red particles (red cells): It is a red-coloured particle, its shape is like a disc, it has dint.
2. White particles (white cells): It is a white-coloured particle, its shape is like a ball, it has a rough surface.
3. Pink particles (Platelets): It is a white-pink coloured particle, it's smaller than other particles, etc...

Summary

- Blood carries oxygen, carbon dioxide, nutrients and waste to cells in the body.
- Blood consists of **red cells, white cells, platelets** and **plasma**.
- Red blood cells are disc shaped and they contain **haemoglobin** used to carry oxygen to all body parts.
- White blood cells are an important part of the body's immune system.
- Platelets help blood clot in order to stop bleeding, to heal cuts and other injuries.
- Plasma is the main component of blood and mostly consists of water. It carries nutrients and water to the cells.

Tips of lesson

1 Summary (30 min.)

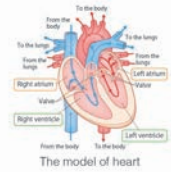
- Recap the main learning contents covered in this topic.
- Base on the main learning contents ask students the following questions.
 - ➔ What is the work of a heart?
 - ➔ What is the function of a vein and an artery?
 - ➔ What does the blood do in our body?
- Explain and correct the learning contents if they still have misconceptions.
- Verify their understanding with the summary points.
- Allow students to read aloud the main ideas of the topic and then copy into their exercise books.

2 Exercise & Explanation 40 min.)

- Go through the instructions of the exercise.
- Allow the students to answer questions individually and give them enough time to respond to the questions based on their understanding.
- After the exercise give them the answers to the questions and explain how to solve them using their scientific understanding and ideas.
- Make reference to the textbook or provide clear examples in daily life to strengthen the learnt concepts in this topic.

1 Summary and Exercise 10.2 Circulatory System

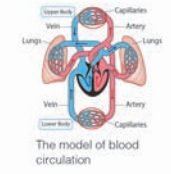
The Heart



The model of heart

- The heart is an important organ that pumps thousands of litres of blood to all parts of the body.
- The heart is about the size of our fist and is located within the rib cage to the left of the centre of the chest.
- The heart is made up of four chambers called left and right atriums and left and right ventricles.
- The atriums receive blood from the body and the lungs and the ventricles pump blood to the lungs and the body.
- The valves open and close and help control the movement and direction of the blood flow.

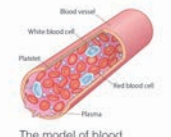
Circulation of the Blood



The model of blood circulation

- Circulatory system is a network of organs such as the heart, blood and blood vessels that transport oxygen, and nutrients to and carbon dioxide from the cells.
- Blood flows through many tubes called blood vessels to get to different parts of our body.
 - The artery is the blood vessel that carries blood away from the heart.
 - The vein is the blood vessel that carries blood back to the heart.
- Capillaries are tiny blood vessels that connect the artery to the vein.
- The blood in the capillaries passes the oxygen to the cells and picks up carbon dioxide from the cells.

Blood



The model of blood

- Blood is made up of solid and liquid parts:
 - The solid parts of the blood include red cells, white cells and platelets.
 - The liquid part of the blood is called plasma.
- Blood carries oxygen, carbon dioxide, nutrients and wastes in our body.


151

2 Summary and Exercise 10.2 Circulatory System

Q1. Complete each sentence with the correct word.

- The _____ is an organ that pumps blood to all parts of the body.
- The heart is made up of four _____.
- The tubes that blood flows through to different parts of the body are called _____.
- Red blood cells contain _____ that is used to carry oxygen.

Q2. Choose the letter with the correct answer.

- What is the name of the particle in the blood shown below?
 
 - White blood cell
 - Plasma
 - Red blood cell
 - Platelet
- Which type of blood vessel does the blood rich in oxygen flow through?
 - Vein
 - Artery
 - Capillaries
 - Cell

Q3. Answer the following questions.

- Sam had a bad fall. He hurt his knee and was bleeding. Soon his wound stopped bleeding, leaving a red lump on the wound. What kind of cell in the blood helped to stop the bleeding?
- Describe the characteristics of the circulatory system.

Q4. Lora ran very fast to catch a ride on a bus. After she sat down she was breathing heavily. Explain the reason for her breathing using the word 'oxygen' in your explanation.

152

Exercise answers

Q1.

- (1) **heart**
- (2) **chambers**
- (3) **blood vessels**
- (4) **haemoglobin**

Q2.

- (1) **C**
- (2) **A**

Q3.

- (1) **Platelets**
- (2) Expected answer
Circulatory system is a group of organs for transporting oxygen and carbon dioxide to and from the cells in our body.

Q4.Expected answer

The cells in her body requires more oxygen so she breathes fast to take in more oxygen and the heart beats quickly to send oxygen throughout her body.

Explanation of Science Extras

3 Science Extras (10 min.)

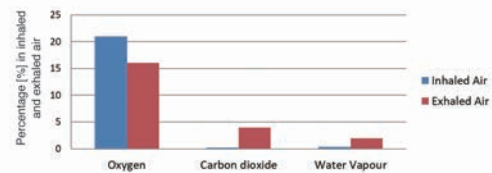
- Give opportunities to students to closely observe the nature and its phenomena in the world.
- Allow students to ask questions that demonstrate curiosity about the content in the science extra.

3

Chapter 10 •Science Extras•

What does the air we inhaled and exhaled contain?

Lungs take in oxygen from the air and release carbon dioxide as waste product. There are other gases that are also inhaled and exhaled. Atmospheric air, which we breathe, is composed of the following gases: nitrogen, oxygen, carbon dioxide, water vapour and other small amounts of gases. Inhaled air by volume contains nitrogen about 78%, oxygen 21%, carbon dioxide 0.04% and water vapour 0.4%. How does the percentage change in exhaled air? Exhaled air by volume contains nitrogen about 78%, oxygen 16%, carbon dioxide 4% and water vapour 2%.



Percentage of oxygen, carbon dioxide and water vapour in inhaled and exhaled air.

Exhaled air contains less oxygen and more carbon dioxide. Oxygen in the inhaled air is transferred to the blood in the lungs and the blood carries oxygen to cells in all parts of our body. The cells receive oxygen to produce its energy and release carbon dioxide as its waste into the blood. When the blood come back to the lungs, carbon dioxide is transferred from the blood to exhaled air. Therefore, exhaled air contains less oxygen and more carbon dioxide than inhaled air.

In addition, there is more water vapour in exhaled air than inhaled air because of the moisture in the airways.

153

Chapter Test

10. Human Body System

Q1

Complete each sentence with the correct word.

- (1) After exercise, we feel the beat of our heart on our chest.
- (2) Blood flows through blood vessels to get to the different parts of our body.
- (3) Blood is made up of red cells, white cells, platelets and plasma.
- (4) When we breathe, we take in oxygen and get rid of carbon dioxide.

Q2

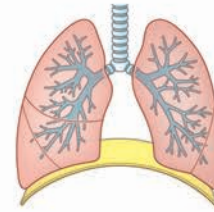
Choose the letter with the correct answer.

- (1) What is the name of the muscle that helps the lungs for breathing to occur?
 A. Diaphragm
B. Nose
C. Alveoli
D. Trachea
- (2) Which muscle in our body works all the time even when we are asleep?
A. Bicep muscle
B. Calf muscle
 C. Heart muscle
D. Cheek muscle
- (3) Why is the white blood cell an important part of the body's immune system?
A. They allow any bacteria to enter the body.
 B. They defend against bacteria, viruses and other infectious diseases.
C. They transport oxygen to the heart.
D. They remove waste from the system.
- (4) What caused the lime water to turn cloudy?
A. Oxygen present in the inhaled air.
 B. Carbon dioxide present in the exhaled air.
C. Heat present in exhaled and inhaled air.
D. Oxygen present in exhaled air.



Q3

Study the picture and explain how the diaphragm and the lung work as air is taken in and taken out.



(1) What happens to the diaphragm and the lungs when we breathe in?

(Expected answer) When the diaphragm contracts it moves down in our chest. This causes our lungs to become bigger and air comes in our lungs and we inhale.

(2) What happens to the diaphragm and the lungs when we breathe out?

(Expected answer) When we exhale, the diaphragm relaxes and it moves up toward the lungs. This causes our lungs to become smaller and air is forced out of our lungs.

Q4

(1) There are two types of blood vessels; an artery and a vein. What are the functions of the artery and the vein?

(Expected answers) An artery is a blood vessel that carries blood away from the heart. A vein is the one that carries blood back to the heart.

(2) How does your pulse rate change before and after an exercise? Explain why.

(Expected answer) During exercise, more oxygen are necessary for our muscle, so blood must carry oxygen to the muscle faster than when the body is resting. To meet these demands, the pulse rate increases.

Chapter Objectives

Students will be able to understand different types of mixtures and the ways by which mixtures can be separated, and understand that solutions are types of mixtures where one or more substances are dissolved into water and its properties.

Topic Objectives

11.1 Mixtures

Students will be able to;

- Classify the different objects into substances and mixtures.
- Describe the combination of three states of substances as different types of mixture.
- Explain that filtration is a method for separating solid from liquid by using a filter.
- Explain that evaporation is a method for separating solid from liquid by evaporating all the liquid from the mixture.

11.2 Solutions

Students will be able to;

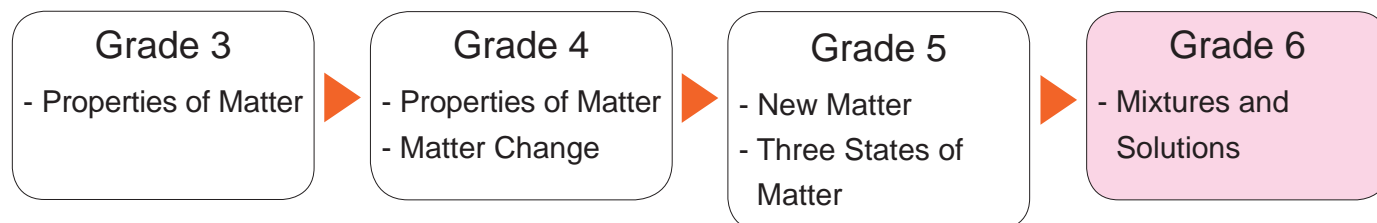
- Describe that solutions are mixtures where two or more substances are dissolved into water evenly and these particles cannot be seen.
- State that when a substance is dissolved in water, its weight does not change.
- Explain that the amount of substances dissolved in water depends on the amount of the water and temperature of the water.



This picture is from the chapter heading of the textbook showing a coloured liquid being poured into another liquid.

Related Learning Contents

The learning contents in this chapter connect to the following chapters.



Prior knowledge for learning this chapter;

- Matter can change physically and chemically.
- Matter can be solid, liquid or gas depending on its temperature.
- A mixture is a matter that is made up of two or more substances.

Teaching Overview

This chapter consists of 11 lessons; each lesson is a double period.

Topic	Lesson No.	Lesson Title and Key Question	Content standard in syllabus	Textbook page number
11.1 Mixtures	1	Mixtures and Substances What is a mixture?	6.2.5	157 - 158
	2	Types of Mixtures What types of mixtures are there?		159 - 160
	3	Separating a Mixture 1 How can we separate sand from water in a mixture?		161 - 162
	4	Separating a Mixture 2 How can we separate salt from water in a mixture?		163 - 164
	5	Summary and Exercise		165 - 166
11.2 Solutions	6	Mixtures and Solutions What is a solution?		167 - 168
	7	Weight of Solution What happens to the weight of a substance in a solution?		169 - 170
	8	Amount of Substance Dissolved in Water 1 How much of a substance can dissolve in water?		171 - 172
	9	Amount of Substance Dissolved in Water 2 How can we dissolve more substance without changing the amount of water?		173 - 174
	10	Summary and Exercise, Science Extra		175 - 177
Chapter Test	11	Chapter Test		178 - 179

Lesson Flow

1 Introduction (5 min.)

- Recap Grade 3 lesson on 'Observing a Mixture'

Q:What happens if one or two different kinds of matter are put together? When one or two kinds of matter are put together they form a mixture.

Q:What are some examples of such matter?

Coffee with milk and sugar, orange juice, fried rice with vegetables.

- Encourage students to think about what is a mixture and what is it made of.

2 Introduce the key question

What is a mixture?

3 Activity (35 min.)

- Put students into their working groups.
- Explain the steps of the activity.
- Advise students to refer to the picture in the activity for their investigations.
- Ask students to do the activity.
- Facilitate students writing their ideas and assists if necessary.
- Have enough time for the students to do their findings through the activity.
- Ask them to share their findings.

4 Discussion for findings (25 min.)

- Let students present their ideas from the activity.
 - Write their findings on the blackboard.
- (Continue)

11.1 Mixtures

Lesson 1 Mixtures and Substances

- 1 A mixture is something made of two or more kinds of matter but do you know what a mixture is? How are mixtures made? What properties do mixtures have?
- 2 ? What is a mixture?
- 3 🔍 Activity : How are mixtures made?

What to Do:

1. Draw a table like the one shown below.

Mixtures	Ingredients or materials

2. Study the picture below. Find the mixtures in the picture and write their names in the table.
3. Write the ingredients or materials that make up each of the mixtures in the table.
4. Share your ideas with your classmates. Discuss how mixtures are made.



157

Teacher's Notes

- 'Mixture and Substance' is once taught in lessons of 'Observing Mixture' and 'Separating Mixture' in Chapter 2, Grade 3. It is a must to review the lesson prior to this lesson. Particularly 'Teacher's Notes' for these lessons provides you key scientific concepts about mixture and substance as follows;
 - Matter is divided into two categories such as 'Pure matter' and 'Mixed matter'. 'Pure matters' are further divided into 'Element' and 'Compound' and 'Mixed matters' are broken into 'Homogeneous' and 'Heterogenous' mixtures.
- Result examples for this activity are summarised in the 'Sample Blackboard Plan' on the right. It mainly describes food. However, the discussion should not be limited to food only. Guide the students to pay attention on anywhere of the picture. For instance; soil may contain sand, clay, worm and compost. A table is made of wood, iron and nails. A river may contain fish, crabs, shrimps, eel, stone, dead plants (twigs, leaves etc..). It is important to recall more prior knowledge learned in science lesson so that students can link and consolidate the knowledges effectively.

Lesson Objectives

- Students will be able to:
- Identify what makes up a mixture.
 - Explain the differences between substances and mixtures.
 - Communicate their ideas with others.

Assessment

- Students are able to:
- State that different materials or substances make up a mixture.
 - Describe how substances and mixtures are different.
 - State their opinions to classmates.

Summary

Matter can be classified as solid, liquid or gas. Matter can also be classified as a substance or a mixture.

A **substance** is one kind of matter with certain properties. A substance is made of only one kind of matter. The colour, texture, smell and taste of all the particles in a substance is the same. For example, salt is a substance. Salt is made of one kind of matter. It does not contain any other kinds of matter. When we taste salt, it always tastes salty. Every part of the salt is the same colour. Water, oxygen, salt and gold are examples of substances.

A **mixture** is a matter that is made up of two or more substances that are combined physically. Sea water, soil and blood are examples of mixtures. Making a mixture results in a physical change. For example, sand, clay and pebbles are combined to make a soil mixture, but sand is still sand and clay is still clay. The physical properties of each substance in the soil mixture do not change.



Examples of substances



5

- Facilitate active students' discussions.
- Confirm students' findings and state that all mixtures are made up of two or more matter mixed together.
- **Based on their findings**, ask these questions as discussion points.

Q:How many kinds of mixtures did you find in the picture? (Answers will vary.)

Q:What are the mixtures made up of? They were made up of more than two kinds of substances.

Q:What are the ingredients or materials made of? (They are made of only one kind of matter.)

Q:Can you guess how mixtures and ingredients/materials are different? (It depends on students' answers.)

- Conclude the discussions.

5

Summary (15 min.)

- Ask students to open their textbooks on the summary page and explain.
- Summarise the today's lesson on the blackboard.
- Ask these questions as assessment:
 - Q: What is a substance?
 - Q: What is a mixture?
 - Q: Name four ingredients or substances which are used to make up a mixture.
- Ask students to copy the notes on the blackboard into their exercise books.

Sample Blackboard Plan

Title:

Mixtures and Substances

Key question: What is a mixture?

Activity: How are mixtures made?

Mixtures	Ingredients or materials
Pizza	Flour, cheese, meat, tomato
Salad	Cucumber, Green leaves, tomato, etc.
Soft drink	Water, sugar, food dye, soda
Soil	Sand, pebbles, clay
...	etc

Discussion

Q: How many kinds of mixtures did you find in the picture?

(Answers will vary)

Q: What are the mixtures made up of?

They are made up of more than two kinds of ingredients or materials.

Q: What are the ingredients or materials made of?

They are made of only one kind of matter.

Q: Can you guess how mixtures and ingredients/materials are different?

(It depends on students' answers.)

Summary

- A **substance** is one kind of matter with certain properties. It is made of only one kind of matter.
- The properties in a substance is the same.
- Water, salt and gold are substances.
- A **mixture** is a matter that is made up of two or more substances that are combined physically.
- Sea water, soil and blood are examples of mixtures

Lesson Flow

1 Introduction (5 min.)

- Review the previous lesson by asking:
Q:What is a substance?
Q:What is a mixture?
- Encourage students to think about the different types of mixtures by asking the key question.

2 Introduce the key question

What types of mixtures are there?

3 Activity (35 min.)

- Organise students into small groups.
- Explain the steps of the activity.
- Have the students draw the table into their exercise books.
- Ask students to do the activity.
- Remind students of the safety rules while investigating.
- Check students' activities and if necessary guide them towards their findings.
- Give enough time for students to do their findings.
- Ask the students to discuss their results in their groups.

4 Discussion for findings (25 min.)

- Ask students to present their findings of the activity.
- Write their findings on the blackboard
(Continue)

Lesson 2 Types of Mixtures

- 1** Mixtures are everywhere. A salad is a mixture. An ocean is also a mixture. Are salad and ocean the same mixtures? How can we classify these mixtures?

2 ? What types of mixtures are there?

3 Activity : Different types of mixtures

What We Need:

- water, salt, sand, cooking oil

What to Do:

1. Draw a table like the one shown below.

Two substances	Their states

2. Choose two substances from the above to make a mixture.

3. Record the types of substances you chose and their states in the table.

4. Mix the two substances.

5. Think about the following questions based on your results:

(1) Which two substances did you choose to make the mixture and what were their states?

(2) How many combinations can you make with the four substances to make a mixture?

6. Share your findings with your classmates. Discuss what types of mixtures are there.



Teacher's Notes

Tips for the Activity

- For this activity students can freely choose any of the substances given to make up a mixture, for example oil and salt can be a mixture.
- A mixture can involve two or more substances of the same phase (state) or different phases. The textbook introduces (1) Solid-Solid mixture, (2) Liquid-Liquid mixtures, (3) Solid-Liquid mixtures and (4) Gas-Gas mixtures. In addition, we have different types of classification of mixture - 'homogenous' and 'heterogeneous' mixtures as explained in 'Teacher's Notes' for the lesson 'Separating Mixture' in Chapter 2, Grade 3. Homogeneous mixture is uniform in composition, whereas heterogeneous mixture have a non-uniform composition. In this classification, the samples in this activity can be grouped as follows;
 - Homogeneous mixture: salt and water, air (nitrogen, oxygen, carbon dioxide and water vapour)
 - Heterogeneous mixture: sand and salt, sand and water, sand and oil, salt and oil, oil and water.
- Comparison between "salt and water" and "salt and oil" is a good example to understand the difference of homogenous and heterogeneous mixtures (salt doesn't dissolve in oil - heterogeneous). Use these examples for further discussion if you have an extra time.

Lesson Objectives

Students will be able to:

- Identify the different types of mixtures.
- Name the different types of mixtures.
- Mix different substances to make a mixture.

Assessment

Students are able to:

- State the different types of mixtures based on the combinations of the three states of matter.
- List some examples of the different types of mixtures.
- Show interest in making different mixtures.

Summary

Substances are matter. They can be in the states of a solid, liquid and gas. Mixtures are combinations of three states of substances. There are many different types of mixtures: Solid-Solid mixture, Liquid-Liquid mixture, Solid-Liquid mixture, Gas-Gas mixture and Gas-Liquid mixture. The following are some examples of the different types of mixtures.

Solid-Solid Mixtures

This type of mixture consists of two or more different solid substances such as rocks. The rock is made of several different kinds of minerals. They are all solids.



Rock is a mixture of minerals.

Liquid-Liquid Mixtures

This type of mixture consists of two or more different liquid substances such as a mixture of vinegar and water and a mixture of oil and water. Vinegar, water and oil are all liquids.



Mixture of oil and water

Solid-Liquid Mixtures

This type of mixture consists of solid and liquid substances such as a mixture of sand and water and salt and water. Sand and salt are solids but water is liquid.



Mixture of sand and water (left) and salt and water (right)

Gas-Gas Mixtures

This type of mixture consists of different gases. For example air. Air is mostly made of gases such as nitrogen, carbon dioxide, oxygen and water vapour.

Do you know of any examples of different types of mixtures?



5

- Facilitate active students' discussions.
- Confirm the findings with the students.
- **Based on their findings**, ask these questions as discussion points.

Q: Which two substances did you choose to make the mixture? (Sand+salt, sand+water, salt+water, water+oil, oil+sand, oil+salt)

Q: What were their states? (solid+solid, solid+liquid, liquid+liquid)

Q: How many combinations can you make with the four substances to make a mixture? (3 combinations)

Q: Are there any other combinations of mixtures? (Yes. They are: solid+gas, gas+gas, liquid+gas)

- Conclude the discussions.

5 Summary (15 min.)

- Ask students to open to their textbooks on the summary page in and explain.
- Summarise the today's lesson on the blackboard.
- Ask these questions as assessment:
 - Q: What are mixtures?
 - Q: In what ways can mixtures be done?
 - Q: What are some other ways that mixtures can be done in everyday experiences?
- Ask students to copy the notes on the blackboard into their exercise books.

Sample Blackboard Plan

Title:

Types of Mixtures

Key question:

What types of mixture are there?

Activity : Different types of mixtures

Results:

Substances or materials	Their states After mixing
Sand and salt	Solid – solid mixtures
Oil and water	Liquid – liquid mixture
Salt and water	Solid – liquid mixtures
Sand and water	Solid – liquid mixtures

Discussion

Q: Which two substances did you choose to make the mixture? **Sand+salt, sand+water, salt+water, water+oil, oil+sand, oil+salt**

Q: what were their states? **solid+solid, solid+liquid, liquid+liquid**

Q: How many combinations can you make with the four substances to make a mixture? **3 combinations**

Q: Are there any other combinations of mixtures? **Yes. They are: solid+gas, gas+gas, liquid+gas**

Summary

- Substances can be in the states of a solid, liquid and gas.
- Mixtures are **combinations of three states of substances**.
- There are many different types of mixtures:
 - Solid-Solid mixture
 - Liquid-Liquid mixture
 - Solid-Liquid mixture
 - Gas-Gas mixture and
 - Gas-Liquid mixture

Lesson Flow

1 Introduction (5 min.)

- Review the previous lesson.

Q:How can the different types of mixtures be made?

Q:Give some examples of different types of mixtures.

- Show a picture or a real mixture and provoke students to think about how to separate the mixture. Ask:

Q:How can we separate this mixture?

2 Introduce the key question

How can we separate sand from water in a mixture?

3 Activity (35 min.)

- Prepare fine sand to be used for the activity. (Wash and dry it for some time prior to the lesson.)
- Put students into their groups.
- Explain the steps of the activity.
- Emphasize on safety rules for using a cutter knife.
- Assist the students to set a filter.
- Ask the students to do the activity and record their observations.
- Ask them to discuss their results in their groups.

Discussion for findings (25 min.)

- 4** Ask students to present their results from the activity.
(Continue)

Lesson 3 Separating a Mixture 1

- 1** A mixture of rice and kidney beans in a bowl can be separated easily by picking them out by hand. How about a mixture of water and sand? Can you separate them by picking them out?

- 2** **?** How can we separate sand from water in a mixture?

3 **Activity : Separating a mixture of water and sand**

What We Need:

- glass, a mixture of sand and water, plastic bottle, cutter knife, cloth, rubber band

What to Do:

- Cut off the top part of the plastic bottle where it is marked with the cutter knife to make a funnel.
- Cover the mouth of the bottle with the cloth and tie it with the rubber band.
- Place the funnel on the open-end of the cut plastic bottle.
- Pour the mixture of water and sand into the funnel.
- Observe what remains on the cloth and in the cut plastic bottle. Record your observations in your exercise book.



Teacher's Notes

Tips for the Lesson

- The water goes down to the bottle after the filtration is not so clear as shown in the diagram in the textbook. It is usually still brown, because the cloth filter cannot stop tiny sand particles.
- Students might expect to have very clear water, encourage students to understand the function of filtration by focusing on the colour of water. It must be more bright or transparent than before.

More information about Filtration

- Filtration is a physical process which separates solids from fluids (liquids or gases) by adding a medium through which only the fluid can pass. The fluid that passes through is called the filtrate. 'Heterogeneous mixtures' are more obviously mixtures to be applied for the separation than 'Homogenous mixtures'.
- For instance, filtration can separate salt in oil since salt is not dissolved (heterogeneous mixture) however, it does not separate salt dissolved in water (solution = homogenous mixtures).
- Evaporation and distillation are applied to separate homogenous mixture (evaporation is taught in next lesson).

Lesson Objectives

Students will be able to:

- Describe how mixtures are separated.
- Understand why sand can be separated by filtration.
- Show their eagerness in investigation.

Assessment

Students are able to:

- State how to separate a mixture in a way of filtration.
- Explain the reason why sand can be separated by filtration by relating to the size of particles.
- Participate actively in the investigation actively.

Result

We found out that in the funnel, sand remained on the cloth but water was collected at the bottom of the plastic bottle.



Discussion

Think about the following questions based on your result.

1. Why did the water in the mixture drop to the bottom of the plastic bottle?
2. What kind of physical property was applied to separate the mixture of water and sand?

What kinds of physical properties can you remember?

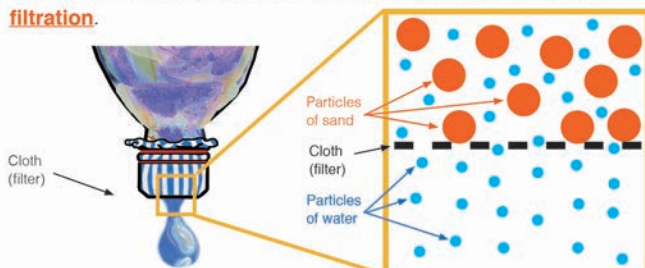


Summary

Mixtures can be separated according to the different physical properties of substances. The property to separate water and sand is 'size'. The particles of water are so small that they can pass through the cloth. But the particles of sand are too large to pass through the cloth and remain in the cloth.

The method for separating a solid from a liquid by using a filter is called

filtration.



Particles of water can pass through the cloth but particles of sand cannot.

162

- Write their results on the blackboard.
- Facilitate active students' discussions.
- Confirm the results with the students.
- **Based on their findings**, ask these questions as discussion points.

Q: Why did water in a mixture drop to the bottom of the bottle? (Because the size of the water particles are too small so they can pass through the cloth.)

Q: Why did the sand remain behind the cloth? (Because the size of the sand particles is too large so they cannot pass through the cloth.)

Q: What kind of physical property was applied to separate the mixture of water and sand? (The size of the particles of the substances.)

- Conclude the discussions.

5 Summary (15 min.)

- Ask students to open their textbooks to the summary page and explain.
- Summarise the today's lesson on the blackboard.
- Ask these questions as assessment:
 - Q: What is the method used to separate the mixture of water and sand?
 - Q: What kind of physical property of substances was applied in filtration?
- Ask students to copy the notes on the blackboard into their exercise books.

Sample Blackboard Plan

Title:

Separating a Mixture 1

Key question:

How can we separate sand from water in a mixture?

Activity: Separating a mixture of water and sand

Record your observation (Result)

- In the top of the bottle, sand remained behind on the cloth.
- Water easily went through the cloth and settled at the bottom of the bottle.

Discussion

Q: Why did the water in a mixture drop to the bottom of the bottle? *Because the size of the water particles are too small so they can pass through the cloth.*

Q: Why did the sand remain behind the cloth?

Because the size of the sand particles is too large so they cannot pass through the cloth.

Q: What kind of physical property was applied to separate the mixture of water and sand?

The size of the particles of the substances.

Summary

• Mixtures can be separated according to different physical properties of substances such as the size.

• A method for separating a solid from a liquid using a filter is called **filtration**.

Lesson Flow

1 Introduction (5 min.)

- Recap the previous lesson by asking:
Q:How are mixtures separated?
Q:What is filtration?
Q:What name is given to the material used in separating solid from liquid?
- Encourage students to think about other ways of separating mixtures. Ask the question:
Q:Can saltwater be separated by filtration?

2 Introduce the key question

How can we separate salt from water in a mixture?

3 Activity (35 min.)

- Organise students into small groups.
- Explain the steps of the activity.
- Remind students about the safety rules when handling the hot water.
- Facilitate Step1 and students record the result.
- Ask students to carry out Step 2 and ask them to record their results.
- Assist and facilitate students' findings if necessary.
- Ask them to share their results in their groups.

4 Discussion for findings (25 min.)

- Ask students to present their results from the activity.
- Write their results on the blackboard.
(Continue)

Lesson 4 Separating a Mixture 2

- 1** A mixture of water and sand can be separated by filtration. How about a mixture of water and salt? Can it also be separated by filtration?

- 2** **?** How can we separate salt from water in a mixture?

3 **Activity : Separating a mixture of water and salt**

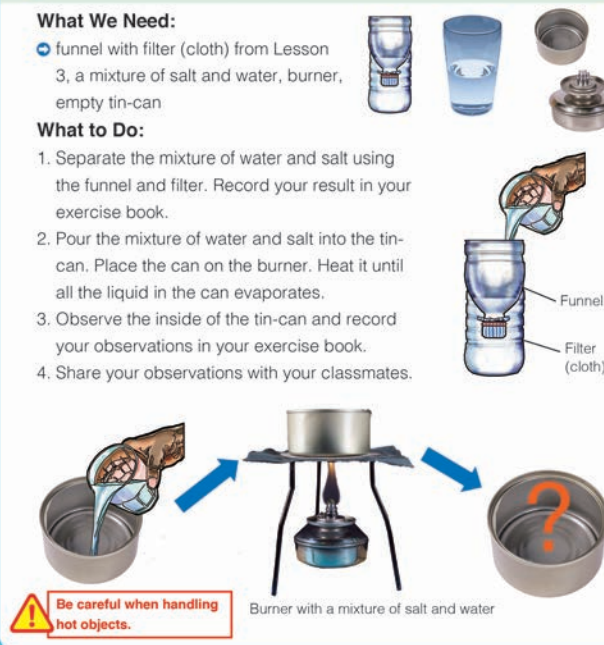
What We Need:

- funnel with filter (cloth) from Lesson 3, a mixture of salt and water, burner, empty tin-can

What to Do:

- Separate the mixture of water and salt using the funnel and filter. Record your result in your exercise book.
- Pour the mixture of water and salt into the tin-can. Place the can on the burner. Heat it until all the liquid in the can evaporates.
- Observe the inside of the tin-can and record your observations in your exercise book.
- Share your observations with your classmates.

4



Teacher's Notes

- The term evaporation is used as a method of separation in this lesson. However, evaporation is more commonly used when a liquid substance becomes a gas. When water is heated, it evaporates. The terminology should be used appropriately to avoid confusion.
- As briefly explained in the previous 'Teacher's Notes', evaporation separate substances of homogeneous mixture. It uses heat to separate the components of a liquid and/or gas.
- In salt solution, the water particles (molecules) keep the salt particles from rearranging themselves back into salt crystal. Salt particles are carried throughout the solution surrounded by water particles. As the water evaporates less and less water particles are present to keep the salt particles apart. The salt therefore recrystallizes and can be collected.
- Traditional salt industry uses this method to take salt out from sea water for cooking (However, modern salt industry applies more effective method now a days.)

SAFETY:

- Be very careful when using a match to light the stove.
- Always use a piece of cloth or tong to hold the heated tin-can.
- Do not look directly into the heated tinned of saltwater (mixture).

Lesson Objectives

Students will be able to:

- Describe how to separate saltwater.
- Understand why salt can be separated by evaporation.
- Show their eagerness in investigation.

Assessment

Students are able to:

- State how to separate saltwater in a way of evaporation.
- Explain the reason why salt can be separated by evaporation by relating the physical properties of salt.
- Show curiosity to find the way to separate saltwater.

Result

We found out that when the mixture of water and salt was poured into the funnel, salt did not remain on the cloth. But when the mixture of water and salt was heated, all the liquid in the tin-can evaporated and a white substance remained.



Discussion

Think about the following questions based on your result.

1. What was the white substance that remained in the tin-can? Why do you think so?
2. Why didn't the salt remain on the cloth?

How do we identify the properties of matter?



Summary

Salt in a mixture of water and salt cannot be separated by filtration. This is because the particles of salt in water are too small and can pass through the filter (cloth). Salt in water can be separated by boiling salt water until all the water has evaporated. A method for separating a solid in a mixture from a liquid is called **evaporation**. For example, when the mixture of water and salt in the tin-can was heated for some time, all the water evaporated as water vapour and salt was left behind.



164

- Facilitate active students' discussions.
- Confirm the results with the students.
- **Based on their findings**, ask these questions as discussion points.

Q: Why didn't the salt remain behind the cloth?

(Because of its particle size. It is so small that it passed through the cloth.)

Q: What was the white substance that remained in the tin-can? (Salt)

Q: Why do you think so? (The colour was still white as well as the taste was salty.)

Q: Why did the salt remain in the tin can? (The salt cannot be evaporated in the air.)

- Conclude the discussions.

5 Summary (10 min.)

- Ask students to open their textbooks to the summary page and explain.
- Summarise today's lesson on the blackboard.
- Ask these questions as assessment:
 - Q: What is evaporation?
 - Q: Why cannot we separate saltwater by filtration?
- Ask the students to copy the notes on the blackboard into their exercise books.

Sample Blackboard Plan

Title: **Separating a Mixture 2**

Key question: How can we separate salt from water in a mixture?

Activity:

Separating a mixture of water and salt

	What happened to the mixture?
After filtration	When the mixture of salt and water was poured into the funnel, salt didn't remain behind the cloth
After heating the mixture	When a mixture of water and salt was heated, water evaporated leaving something white in the tin can.

Discussion

Q: Why didn't the salt remain behind the cloth? **Because of its particle size is so small that it passed through the cloth.**

Q: What was the white substance that remained in the tin-can? **Salt**

Q: Why do you think so? **The colour was still white as well as the taste was salty.**

Q: Why did the salt remain in the tin can?

The salt cannot be evaporated in the air.

Summary

• Salt in a mixture of water and salt cannot be separated by **filtration** because the particles of salt in water become so small that they pass through the cloth.

• Salt in water can be separated by heating salt water until all the water has evaporated.

• A method of separating a solid in a mixture from a liquid is called **evaporation**.

Lesson
5 / 11

Lesson Title
Summary and Exercise

Tips of lesson

1 Summary (40 min.)

- Recap the main learning contents covered in this topic.
- Based on the main learning contents ask students the following questions.
 - What is a mixture?
 - What is a substance made of?
 - In what ways can mixtures be separated?
- Explain and correct the learning contents again if they still have misconceptions.
- Verify their understanding with the summary points.
- Allow students to read aloud the main ideas of the topic and then copy into their exercise books.







2 Exercise & Explanation (40 min.)

- Go through the instructions of the exercise.
- Allow students to answer the questions individually and give them enough time to respond to the questions based on their understanding.
- After the exercise give them the answers to the questions and explain how to solve them using their scientific understanding and ideas.
- Make reference to the textbook or provide clear examples in daily life to strengthen the learnt concepts in this topic.

1 Summary 11.1 Mixtures

Mixtures and Substances

Matter can be classified as a substance or a mixture.
 A substance is made up of only one kind of matter.
 A mixture is a kind of matter that is made up of two or more substances.

Examples of substances			Examples of mixtures		
					
Water	Salt	Gold	Rock	Soil	Salt water


Types of Mixtures

Mixtures are combinations of three states of substances; solid, liquid and gas.

Solid-solid mixture	Liquid-liquid mixture	Solid-liquid mixture	Gas-gas mixture
This type of mixture consists of two or more different solid substances. E.g. Rock	This type of mixture consists of two or more different liquid substances. E.g. Mixture of oil and water	This type of mixture consists of solid and liquid substance. E.g. Mixture of salt and water	This type of mixture consists of different gases. E.g. The air we breathe is made up of different gases.

Separating a Mixture 1 and 2

Mixtures can be separated according to the different physical properties of substances that they are made up of.
 Filtration is a method for separating solid from liquid by using a filter.
 Evaporation is a method for separating solid from a liquid by evaporating all the liquid from the mixture.



Salt in water cannot be separated by filtration. This is because the particles of salt in water are too small and can pass through the filter. Salt in water can be separated by evaporation.

165

2 Exercise 11.1 Mixtures

Q1. Complete each sentence with the correct word.

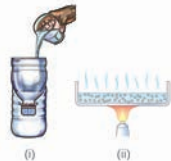
- A _____ is made up of two or more substances that are physically combined.
- Liquid-liquid mixture consists of two or more different _____ substances.
- The method for separating solid from a liquid by evaporating all the liquid from the mixture is _____.

Q2. Choose the letter with the correct answer.

- Which of the following is an example of a solid-liquid mixture?
 - A. Rock
 - B. Sugar water
 - C. Water
 - D. Air
- What happens when salt dissolves in water?
 - A. The particles can be clearly seen.
 - B. Salt particles are inactive or weak.
 - C. The particles cannot be seen.
 - D. It becomes a liquid.

Q3. Answer the following question.

Study figures (i) and (ii) shown on the right. Shirley dissolved two teaspoons of sugar in water. Which method (i) or (ii) will she use to separate the sugar from the water?



Q4. Samuel tried to separate mud from water by filtration, but the liquid after passing through the filter is still brown in colour. Explain why the mud water cannot be separated by filtration.

166

Exercise answers

Q1.

- (1) **mixture**
- (2) **liquid**
- (3) **evaporation**

Q2.

- (1) **B**
- (2) **C**

Q3. Expected answer

She should use evaporation method.

Q4. Expected answer

Some particles of mud in the mud water are so small that they can pass through the filter. That is why the filter cannot stop all the particles of mud and the liquid after passing through the filter still contains particles of mud.

Lesson Flow

1 Introduction (5 min.)

- Revise the previous lesson. Ask:

Q:How are the methods for separating a mixture different from filtration and evaporation?

Q:How can salt be separated from water in a mixture?

- Encourage students to think about special type of mixtures by introducing the key question.

2 Introduce the key question

What is a solution?

3 Activity (35 min.)

- Organise the students into small groups.
- Explain the steps of the activity and ask them copy the table for recording their findings.
- Refer students to what the character is saying for their investigations.
- Have students do the activity.
- Facilitate each group activity and assist where necessary.
- Give enough time for students to do the experiments.
- Ask students to discuss their findings with their groups.

4 Discussion for findings (25 min.)

- Ask students to present their results from the activity.
 - Write their results on the blackboard.
- (Continue)

11.2 Solutions

Lesson 1 Mixtures and Solutions

1 In the last topic we studied about mixtures. We are now going to look at special types of mixtures, called **solutions**.

2 **?** What is a solution?

3 **Activity : Comparing mixtures**

What We Need:
two glasses, water, salt, sand, spoon

What to Do:
1. Draw a table like the one shown below.

	Your observation
A mixture of water and sand	
A mixture of water and salt	

2. Pour the same amount of water into two glasses.
3. Add a half spoonful of sand in one glass and a half spoonful of salt in the other glass. Stir the contents of the two glasses.
4. Observe the two types of mixtures and record your observations in the table. Share your findings with your classmates.

How are they similar or different? How can we compare the two mixtures?

Sand and water mixture Salt and water mixture

167

Teacher's Notes

What is a solution?

- A solution is a specific type of mixture where one substance is dissolved into another. A solution is the same, or uniform, throughout which makes it a homogeneous mixture.

A solution has certain characteristics:

- It is uniform, or 'homogeneous', throughout the mixture.
- It is stable and doesn't change over time or settle.
- The solute particles are so small they cannot be separated by filtering.
- The solute and solvent molecules cannot be distinguished by the naked eye.
- It does not scatter a beam of light.

Example of a Solution

Saltwater, cola or vinegar are the examples of a solution. They are mixture of water and other substances such as salt, sugar or acids. You cannot see the particles of them.

Parts of a Solution

- Solute - The solute is the substance that is being dissolved by another substance. In the example above, the salt is the solute.
- Solvent - The solvent is the substance that dissolves the other substance. In the example above, the water is the solvent.

Lesson Objectives

Students will be able to:

- Define the word solution.
- Compare a mixture of sand and water with a mixture of salt and water.
- Communicate their ideas with others.

Assessment

Students are able to:

- State the definition of solution.
- Explain the difference between a mixture of sand and water and a mixture of salt and water.
- Express their ideas actively during discussion.

Result

We found out that sand particles could be seen in the mixture of sand and water, but salt particles could not be seen in the salt and water mixture.



Sand and water mixture Salt and water mixture



Discussion

Think about the following questions based on your result.

1. What happened to the mixtures in each glass?
2. When we mixed salt and water, it disappeared. Where has the salt in the mixture gone to?



They are both mixtures! But, how are they different?

Summary

A **solution** is a mixture where one or more substances are dissolved evenly into another substance. Solutions have the same properties throughout the mixture. To **dissolve** means to mix completely by separating into particles that cannot be seen. For example, salt-water is a solution. When we mix sand and water, we can make a mixture of sand and water.

The salt particles in salt-water cannot be seen because the particles of salt become so small and they spread evenly in the water. But when we mix sand and water the sand settles at the bottom. The sand does not dissolve into the water. The mixture of sand and water is not a solution. Soda, air and gasoline are examples of solutions.



Carbon dioxide

Soda is a solution where carbon dioxide is dissolved in water.

- Facilitate active students' discussions.
- Confirm the result with the students.
- **Based on their results**, ask these questions as discussion points.

Q: What happened to the mixture in each glass? (In the mixture of sand and water, sand did not dissolve in water instead settled at the bottom of the glass. In the mixture of salt and water, salt dissolved in water and it disappeared.)

Q: When we mixed salt with water, it disappeared. Where has the salt gone? (The salt dissolved in water, the salt has gone somewhere, the salt disappeared, etc)

- Conclude the discussions.

5 Summary (15 min.)

- Ask students to open their textbooks to the summary page and explain.
- Summarise today's lesson on the blackboard.
- Ask these questions as assessment:
 - Q: What is a solution?
 - Q: How are a mixture of sand and water and a mixture of salt and water different?
 - Q: What does the word of 'dissolve' means?
- Ask students to copy the notes on the blackboard into their exercise books.

168

Sample Blackboard Plan

Title:

Mixtures and Solutions

Key question:

What is a solution?

Activity: Comparing mixtures

	Your observation
A mixture of water and sand	The sand can be seen in the mixture Sand settle down, etc...
A mixture of water and salt	The salt cannot be seen in the mixture. The salt disappeared etc...

Discussion

Q: What happened to the mixture in each glass? *In the mixture of sand and water, sand did not dissolve in water instead settled at the bottom of the glass. In the mixture of salt and water, salt dissolved in water and it disappeared.*

Q: When we mixed salt with water, it disappeared. Where has the salt gone?

*The salt dissolved in water,
The salt has gone somewhere,
The salt disappeared, etc...*

Summary

- A **solution** is a mixture where one or more substances are dissolved evenly into another substance.
- A solution has the same properties throughout a mixture.
- **Dissolve** means to mix completely by separating into particles that cannot be seen.

Lesson Flow

1 Introduction (5 min.)

- Recap the previous lesson. Ask:

Q:What is a solution?

Q:How is a mixture of sand and water and a mixture of salt and water different?

Q:What does the word of 'dissolve' means?

- Encourage students to think about the weight of salt when it is mixed with water by asking;

Q:When salt is mixed with water, it seemed to disappear, how about its weight?

2 Introduce the key question

What happens to the weight of a substance in a solution?

3 Activity (35 min.)

- Organise the students into groups.
- Explain the steps of the activity.
- Ask students to predict what will happen to the weight of a substance in a solution.
- Refer students to the diagram below the activity to help facilitate the activity.
- Have students carry out the investigation and record their results in the table.
- Check students' activity and if necessary guide them towards their results.
- Ask them to share their results in their groups.

4 Discussion for findings (25 min.)

- Ask students to present their results from the activity. (Continue)

Lesson 2 Weight of Solution

- 1 When salt is mixed with water, the salt in the salt-water seems to disappear. How about the weight of the salt? Does the weight of salt also disappear?

- 2 ? What happens to the weight of a substance in a solution?

3 Activity : Measuring the weight of salt in salt-water

What We Need:

- glass, water, salt, paper, scale



What to Do:

1. Draw a table like the one shown below.

	Total amount of weight
Before dissolving salt in water	
After dissolving salt in water	

2. Pour water into the glass. Place the glass of water and the paper with salt on the scale.
3. Measure the total amount of weight and record it in the table.
4. Remove salt from the scale. Pour the salt into the glass and stir until the salt is completely dissolved.
5. Place the glass and paper on the scale again and measure the total weight. Record the weight in the table. Share your findings with your classmates.



Teacher's Notes

In a solution sometimes a solute does not cease to exist when it dissolves. If the water in the solution is evaporated, the solute is left behind. The total mass stays the same during dissolving. For example, if 1 g of salt is dissolved in 100 g of water, the mass of salt solution formed is 101 g (1 + 100). This is called conservation of mass.

Tips for the Activity

- Guide students well to measure weight of salt and water by referring to the Science Toolbox 'How to use a digital scale'.
- Answers provided on the blackboard plan are just examples; most importantly the weight of the substance dissolve in water should be equal to the sum of the weight of water and a substance to be dissolved.
- When measuring after dissolving salt in water, make sure to include the piece of paper too on the scale as shown in the textbook.

Lesson Objectives

Students will be able to:

- Realise that the weight of substance does not change before and after dissolving.
- Explain the relationship between the weight of solution with the sum of water and the substance dissolved in water.

Assessment

Students are able to:

- Describe that the weight of substance does not change before and after dissolving in water even if it looks disappeared.
- State that the weight of solution is equal to the sum of water and the substance dissolved in water.

Result

We found out that the total amount of weight before and after dissolving salt in water did not change.



Discussion


Think about the following questions based on your result.

1. What was the total amount of weight before dissolving salt in water?
2. What was the total amount of weight after dissolving salt in water?
3. What happened to the weight of salt before and after it is dissolved in water?

Summary

When a substance is dissolved in water its weight does not change.

The weight of a solution is equal to the sum of the weight of water and a substance to be dissolved. A substance dissolved in water cannot be seen but it actually exists in the solution.



- Write their results on the blackboard.
- Facilitate active students' discussions.
- Confirm the result with the students.
- **Based on the students' results**, ask these questions as discussion points.

Q:What was the total amount of weight before dissolving salt in water? (100 grams)

Q:What was the total amount of weight after dissolving salt in water? (100 grams)

Q:What happened to the weight of the salt before and after it is dissolved in water? (The weight of the salt before and after it was dissolved in saltwater does not change.)

- Conclude the discussions.

5 Summary (15 min.)

- Ask students to open their textbooks to the summary page and explain.
- Summarise today's lesson on the blackboard.
- Ask these questions as assessment:

Q: What happened to the weight of solution before and after dissolving salt in water?

Q: What can you say about the relationship among the weight of a solution, water and the substance dissolved in water?

- Ask students to copy the notes on the blackboard into their exercise books.

170

Sample Blackboard Plan

Title:

Weight of Solution

Key question: What happens to the weight of a substance in a solution?

Activity:

Measuring the weight of salt in salt water.

Examples of Result

	Total amount of weight
Before dissolving salt in water	100 grams
After dissolving salt in water	100 grams

Discussion

Q: What was the total amount of weight before dissolving salt in water?

It was 100 grams

Q: What was the total amount of weight after dissolving salt in water?

It was 100 grams

Q: What happened to the weight of the salt before and after it is dissolved in water?

The weight of the salt before and after it was dissolved in the water does not changed

Summary

- When a substance is dissolved in water its weight does not change.
- Weight of a solution is always equal to the sum of the weight of water and a substance to be dissolved.
- A substance that dissolves in water cannot be seen, but it is always present in the solution.

Lesson
8 / 11

Lesson Title
**Amount of Substance
Dissolved in Water 1**

Preparation

glass cup, water, spoon, salt, A4 paper, scale

Lesson Flow

1 Introduction (5 min.)

- Review the previous lesson. Ask:
Q:What happen to the weight of solution before and after dissolving salt in water?
Q:What is the relationship among the weight of a solution, water and the substance dissolved in water?
- Encourage students to think about how much substance can be dissolved in water by asking:
Q:What happens when a substance is continuously added to water?

2 Introduce the key question

How much of a substance can dissolve in water?

3 Activity (35 min.)

- Organise students into groups.
- Explain the steps of the activity.
- Ask students to predict how much of salt dissolves in 50 mL and 100 mL of water.
- Have students do their activity based on their predictions and record their results in their exercise books.
- Check students' activity and if necessary guide them towards their findings.
- Provide enough time to students for their investigations.
- Ask students to summarise the results in a graph.

Lesson 3 **Amount of Substance
Dissolved in Water 1**

- 1** Salt can be dissolved in water, but what will happen if we keep adding more salt? Will the salt continue to dissolve?

- 2** **?** How much of a substance can dissolve in water?

3 **Activity : Amount of salt to be dissolved in water**

What We Need:

- glass, water, spoon, salt, paper, scale

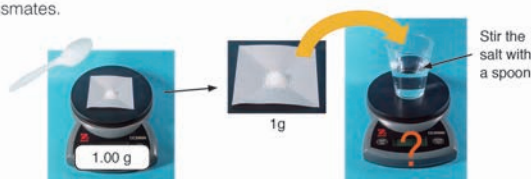


What to Do:

1. Draw a table like the one shown below.

	The amount of salt dissolved
50 mL water	
100 mL water	

2. Pour 50 mL of water into the glass. Add 10 g of salt into the glass of water and stir it well with a spoon.
3. Measure 1 g of salt on the scale. Add 1 g of salt into the water and stir it well. Repeat this step until the salt no longer dissolves in the water. Record the amount of salt dissolved in 50 mL of water in the table.
4. Repeat Steps 2 and 3 using 100 mL of water. Record your results in the table.
5. Summarise your results in a graph and share your findings with your classmates.



171

Teacher's Notes

Tips for the Activity

- When conducting this experiment, try not to use hot or warm water, this will be covered in the next lesson. Water in room temperature (cold water) is appropriate for this lesson to obtain the intended result.
- After adding the salt to the saltwater solution, use the scale to measure the amount of salt dissolved in 50mL and 100mL of water in Steps 2 and 3.
- Refer to the Science Toolbox 'How to Make a Graph'. Guide students well to summarise their results on a graph and know where to plot temperature of water and amount of salt on the correct axis of the graph (vertical and horizontal).

Additional Notes

- This lesson focuses on a special type of solution, called saturated solutions. Saturated solution is a solution that contains the maximum amount of solute (substance to be dissolved i.e. salt) that is capable of being dissolved. The maximum amount of solute varies substance by substance and temperature. The table below shows the maximum amount of sugar and salt to be dissolved in 100g of water by temperature. As it is shown in the table, there is a big difference in their amount and sugar can be dissolved much more than the salt. Therefore, sugar should not use for this experiment.

Temperature	0°C	20°C	40°C	60°C	80°C	100°C
Sugar	179 g	204 g	238 g	287 g	362 g	487 g
Salt	35.7 g	36.0 g	36.6 g	37.3 g	38.4 g	39.8 g

Lesson Objectives

Students will be able to:

- Recognise that the amount of substance dissolved in water is decided.
- Infer the relationship between the amount of water and the salt that dissolved in water.

Assessment

Students are able to:

- Explain that the amount of salt that can be dissolved in water depends on the amount of water.
- State that the amount of salt that can be dissolved in water is proportional to the amount of water.

Result

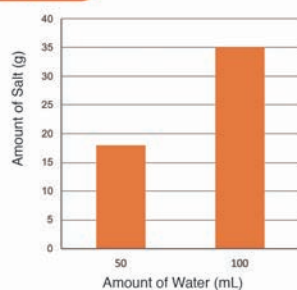
We found out that salt dissolves in water as shown in the table and graph.

Sample of the results

	The amount of salt dissolved
50 mL water	18 g
100 mL water	35 g



Can you find any relationships between the amount of water and the salt dissolved in water?



Discussion

Think about the following questions based on your result.

1. Do you think salt can continue to dissolve in water? Why do you think so?
2. What happened to the amount of salt that dissolved in water when the amount of water increased?
3. Can you infer the relationship between the amount of water and the salt that dissolved in water?

Summary

If we keep adding salt to the salt-water solution, the salt will no longer dissolve but will settle to the bottom of the container. This is because the amount of salt that can be dissolved in a certain amount of water has been reached. The amount is different from substance to substance. More substances will dissolve in water when the amount of water increases. If the amount of water decreases the amount of substance to be dissolved in water will also decrease.

172

4 Discussion for findings (25 min.)

- Ask students to present their results from the activity.
- Write their results on the blackboard.
- Facilitate active students' discussions.
- Confirm the results with the students.
- **Based on their findings**, ask these questions as discussion points.

Q: Do you think salt can continue to dissolve in water unlimitedly or not? (No)

Q: Why do you think so? (Because when we keep adding salt, the salt will no longer dissolve and settle at the bottom of the container.)

Q: What happened to the amount of salt that dissolved in water when the amount of water was increased? (The amount of salt dissolved in water increased.)

Q: What is the relationship between the amount of water and that of the salt dissolved in water? (More substance dissolves in water when the amount of water increases)

- Conclude the discussions.

5 Summary (15 min.)

- Ask students to open their textbooks to the summary page and explain.
- Summarise today's lesson on the blackboard.
- Ask these questions as assessment:

Q: How can we dissolve more salt in water?

Q: What is the relationship between the amount of water and that of a substance dissolved in water?

- Ask students to copy the notes on the blackboard into their exercise books.

Sample Blackboard Plan

Title:

Amount of Substance Dissolved in Water 1

Key question: How much of a substance can dissolve in water?

Activity:

Amount of salt to be dissolved in water

Examples of Result

Amount of water	Amount of salt dissolve.
50mL of water	18 g
100mL of water	35 g

Discussion

Q: Do you think salt can continue to dissolve in water unlimitedly or not? **No**

Q: Why do you think so? **Because when we keep adding salt, the salt will no longer dissolve and settle at the bottom of the container.**

Q: What happened to the amount of salt dissolved in water when the amount of water was increased? **The amount of salt dissolved in water increased.**

Q: What is the relationship between the amount of water and that of the salt dissolved in water?

More substance dissolves in water when the amount of water increases and less substance dissolves in water when the amount of water decreases.

Summary

- Amount of substance that can dissolve in water is often decided.
- The amount is different from substance to substance.
- More substance will dissolve in water when the amount of water increases.
- Less substance will dissolve in water when the amount of water decreases.

Lesson
9 / 11

Lesson Title
**Amount of Substance
Dissolved in Water 2**

Preparation

glass, water(room temperature), hot water, spoon, thermometer,sugar, scale

Lesson Flow

1 Introduction (5 min.)

- Review the previous lesson: Ask:
Q:How can we dissolve more salt in water?
- Motivate students to think about another way to dissolve more salt in water and ask the question:
Q:Do you have any ideas on how to dissolve more substance in water?

2 Introduce the key question

How can we dissolve more substance without changing the amount of water?

3 Activity (35 min.)

- Organise students into groups.
- Explain the steps of the activity.
- Remind the students of how to use and read a thermometer.
- Ask students to predict what will happen to the sugar if the temperature of water changes.
- Let students do the activity based on their predictions and record their results in their exercise books.
- Check students' activity and if necessary guide them towards their results.
- Ask the students to discuss their results in their groups.

4 Discussion for findings (25 min.)

- Ask students to present their results from the activity.
(Continue)

Lesson 4 Amount of Substance
Dissolved in Water 2

- 1** More salt will dissolve in water when the amount of water increases.

- 2** ? How can we dissolve more substance without changing the amount of water?

3 **Activity : Dissolving more sugar in water**

What We Need:

- glass, water (room temperature), hot water, spoon, thermometer, sugar, scale

What to Do:

1. Draw a table like the one shown below.

	Temperature (°C)	The weight of the glass with water (g)	The weight of the glass, water and sugar dissolved in water (g)
Water			
Hot water			


2. Pour 50 mL of water into the glass. Measure the weight of the glass with the scale and the temperature of the water with the thermometer. Record the measurement of the weight and the temperature in the table.

3. Add sugar into the glass and stir well. Repeat this step until the sugar no longer dissolves in the water.

Then measure the weight of the glass and record it in your exercise book.

4. Repeat Steps 2 and 3 using 40°C and 60°C hot water.

5. Share your results with your classmates.



Teacher's Notes

Tips for the Activity

- After recording the weight and temperature of the water in Step 1, gently remove the thermometer from the glass then proceed to Step 2.
- Consider that answers provided on the blackboard plan are just examples as a guide for teacher.

Effect of heating on solubility

- Students may notice that or ask why so much sugar dissolves at a higher temperature compared to salt. There are so many factors involved that it is difficult to explain why the solubility of one substance is affected more than another by an increase in temperature. All substances are made up of different atoms, ions and molecules. They are held together differently and interact with water differently. Hence, the changing temperature also affects the motion (movement) of the atoms, ions and molecules of the substance together with the interaction between the molecules of water and the particles of the substance.
- Data for salt and sugar dissolving in water by different temperatures is available in 'Teacher's Notes' in the previous lesson.

Lesson Objectives

Students will be able to:

- Measure the temperature of water and the weight of solution.
- Infer the relationship between the temperature of water and the substance that dissolved in water.
- Communicate their ideas with others.

Assessment

Students are able to:

- Record the temperature of water and the weight of solution in the table.
- Discover the relationship between the temperature of water and the sugar that dissolved in water based on the result of the activity.
- Participate in the discussions actively.

Result

We found out that more sugar can be dissolved in the same amount of water at different temperatures shown in the table and the graph.

Example of the results

	Temperature	The weight of the glass with water	The weight of the glass, water and sugar dissolved in water
Water (50 mL)	20°C	180 g	282 g
Hot water (50 mL)	40°C	180 g	300 g
Hot water (50 mL)	60°C	180 g	323 g

Amount of sugar and salt dissolved in 100 g water

Discussion

Think about the following questions based on the results above.

1. Calculate how much sugar is dissolved in 50 mL of water at 20°C, 40°C and 60°C.
2. What happened to the amount of sugar dissolved in water when the temperature of water increased?
3. Can you infer the relationship between the temperature of water and the amount of sugar dissolved in water?

How can we calculate the weight of sugar dissolved in water?

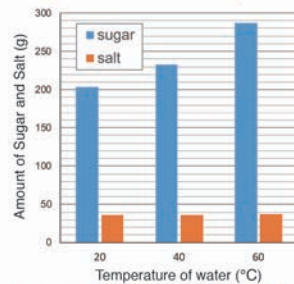


Summary

When the temperature of water increases more sugar can be dissolved, but the amount of salt to be dissolved does not change much. The amount of a substance that can be dissolved in water depends on the kind of substance even when the temperature of water increases.

Temperature of water	Amount of sugar dissolved in water	Amount of salt dissolved in water
20°C	203.9 g	35.9 g
40°C	233.1 g	36.4 g
60°C	287.3 g	37.0 g

Amount of sugar and salt dissolved in 100 g water



Amount of sugar and salt dissolved in 100 g of water

- Write their results on the blackboard
- Facilitate active students' discussions.
- Confirm the result with the students.
- **Based on their results**, ask these questions as discussions point.

Q: Calculate how much of sugar dissolved in 50 mL at 20°C, 40°C and 60°C. (20°C – 102g, 40°C – 120 g and 60°C – 143 g)

Q: What happened to the amount of sugar dissolved in water when the temperature of water increased? (More sugar was dissolved in water when its temperature increased.)

Q: Can you infer the relationship between the temperature of water and the amount of sugar dissolved in water? (The higher the temperature of water, the more sugar can be dissolved in water etc...)

- Conclude the discussions.

5 Summary (15 min.)

- Ask students to open their textbooks to the summary page and explain.
- Summarise today's lesson on the blackboard.
- Ask these questions as assessment:

Q: How can we dissolve more salt in water?

Q: What is the relationship between the amount of water and that of a substance dissolve in water?

- Ask students to copy the notes on the blackboard into their exercise books.

174

Sample Blackboard Plan

Title: Amount of Substance Dissolve in Water 2

Key question: How can we dissolve more substance without changing the amount of water?

Activity: Dissolving more sugar in water

	Temp (°C)	Weight of glass with water (g)	Weight of glass, water and sugar (g)
Water	20°C	180	282
Hot	40°C	180	300
water	60°C	180	323

Examples of Result

Discussion

Q: Calculate how much of sugar dissolved in 50mL at 20°C, 40°C and 60°C.

20°C: $282 - 180 = 102g$

40°C: $300 - 180 = 120g$

60°C: $323 - 180 = 143g$

Q: What happened to the amount of sugar dissolved in water when the temperature of water increased?

More sugar was dissolved in water when its temperature increased.

Q: Can you infer the relationship between the temperature of water and the amount of sugar dissolved in water? **The higher the temperature of water, the more sugar can be dissolved in water etc...**

Summary

- When the temperature of water increases more sugar can be dissolved.
- The amount of salt to be dissolved does not change much.
- The amount of a substance that can be dissolved in water depends on the kind of substances despite of increased temperature of water.

Tips of lesson

1 Summary (20 min.)

- Recap the main learning contents covered in this topic.
- Based on the main content learnt ask students the following questions.
 - What is a solution?
 - Why is a substance that exists in a solution cannot be seen?
 - How can you make more substance dissolve in water?
- Explain and correct the learning contents again if they still have misconceptions.
- Verify their understanding with the summary points.
- Allow students to read aloud the main ideas of the topic and then copy into their exercise books.


2 Exercise & Explanation (30 min.)

- Go through the instructions of the exercise.
- Allow students to answer the questions individually and give them enough time to respond to the questions based on their understanding.
- After the exercise give them the answers to the questions and explain how to solve them using their scientific understanding and ideas.
- Make reference to the textbook or provide clear examples in daily life to strengthen the learnt concepts in this topic.

1 Summary 11.2 Solutions

Mixtures and Solutions


- A solution is a mixture where one or more substances are evenly dissolved into another substance.
- Dissolve means to mix completely by separating into particles that cannot be seen.
- A solution has the same property throughout a mixture.
- Salt-water is a solution. When salt is mixed with water its particles spread evenly in the mixture where salt particles cannot be seen.



Salt-water

Weight of Solutions

- The weight of a solution is equal to the sum of water and the substance to be dissolved.
- The weight of a substance does not change when the substance is dissolved in water.
- A substance that dissolves in water cannot be seen but it exists in the solution.



Water 100 g + Salt 5 g = Salt-Water (solution) 105 g

Amount of Substance Dissolved in Water

- The amount of substance that dissolves in water depends on the amount of water and the temperature of water.
 - More substances dissolve in water when the amount of water increases.
 - More substances dissolve in water when the temperature of water increases.
- The amount of substances that dissolve in water depend on the type of the substances.

175

2 Exercise 11.2 Solutions


Q1. Complete each sentence with the correct word.

- A kind of mixture where one or more substances are evenly dissolved into another substance is called a _____.
- Solution have the same _____ throughout a mixture.
- A substance in a solution is hard to see because it is _____.
- The weight of a solution is equal to the _____ of the weight of water and the substance to be dissolved.

Q2. Choose the letter with the correct answer.

- Which of the following is **not** a solution?
 - Mixture of salt and water.
 - Mixture of oil and water.
 - Mixture of sugar and water.
 - Soda water.
- What happens to the amount of sugar dissolved in water if the temperature of water is increased?
 - Less sugar will dissolve in water.
 - More sugar will dissolve in water.
 - The amount of dissolved sugar does not change.
 - The volume of water will decrease.

Q3. Answer the following questions.
Study and compare the picture shown on the right.



A mixture of sand and water A mixture of salt and water

- What can you say about the particles of sand and salt in the mixture?
- What are the two factors that cause the change in the amount of salt dissolved in water?

Q4. Celine added 50 g of sugar into 200 g of hot water. She stirred the sugar to dissolve completely in the hot water and recorded the weight. Explain the relationship between the weight before and after dissolving?

176

Exercise answers

Q1.

- (1) **solution**
- (2) **properties**
- (3) **small**
- (4) **sum**

Q2.

- (1) **B**
- (2) **B**

Q3.

- (1) **Grains of the sand can be seen while the particles of salt cannot be seen.**
- (2) **1) Temperature of water 2) amount of water.**

Q4. Expected answer

**The weight of solution is equal to the sum of water and the substance to be dissolved.
200 g + 50 g**

Explanation of Science Extras

3 Science Extras (10 min.)

- Give opportunities to students to closely observe the nature and its phenomena in the world.
- Allow students to ask questions that demonstrate curiosity about the content in the science extra.




Chapter 11
•Science Extras•

Solutions are types of mixtures. A mixture of sugar and water is an example of a solution. We learnt that when the temperature of water increases more sugar can be dissolved. What happens when more sugar is dissolved in hot water and it is cooled?

Let's make sugar crystal from sugar solution

1. Wet the end of the skewer in a glass of water. Coat it with sugar grains and gently tap to remove excess sugar and leave to dry.
2. Pour 200 ml of water into a medium sized pot. Dissolve 250 g of sugar in the pot for a start. Heat the sugar mixture.
3. Keep stirring the sugar mixture until it gets hot. Add another 250 g of sugar little by little into the pot and stir until all sugar completely dissolve.
4. Pour the thick sugar solution into the glass cup.
5. Place the skewer coated with sugar grains slowly into the glass cup.
6. Carefully move the glass cup to a place where they won't be disturbed.
7. Make sure not to touch the glass cup. Leave about one day for crystal to form and slowly build up.
6. Observe the crystal of sugar formed around the skewer.

Crystal of sugar



177

Chapter Test

11. Mixtures and Solutions

Q1

Complete each sentence with the correct word.

- (1) Air is a mixture of gases such as nitrogen, carbon dioxide.
- (2) A solution has the same properties throughout the mixture.
- (3) To dissolve means to mix matter completely into the liquid by separating into its particles that cannot be seen.
- (4) A mixture is a combination of two or more substances.
- (5) Mixtures can be separated using their physical properties.

Q2

Choose the letter with the correct answer.

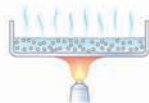
- (1) Which of the following is the correct explanation about filtration?
 - A. Let the water evaporate from the mixture.
 - B. Use filter paper to trap the solid from the mixture.
 - C. Use tweezers to pick out the solid from the mixture.
 - D. Use a magnet to attract the solid from the mixture.
- (2) Sugar dissolved in water is an example of which type of mixture?
 - A. Liquid-solid mixture.
 - B. Gas-liquid mixture.
 - C. Liquid-liquid mixture.
 - D. Solid-liquid mixture.
- (3) What happens to the weight of a substance in a solution? The weight of the solution
 - A. does not change.
 - B. increases.
 - C. disappears.
 - D. decreases.
- (4) What is the correct method used to separate salt from water?
 - A. By evaporation
 - B. By condensation
 - C. By expansion
 - D. By filtration

Q3

(1) Josie wants to separate salt from water. Which method would she use A, B or C?

A

A.



Heat gently
(Evaporate)

B.



By handpicking

C.



Filtration

(2) Explain two ways to increase the amount of salt dissolved in water.

- Increase the amount of water to make more salt dissolve in water.
- Increase the temperature of water to make more salt dissolve in water.

(3) Angie added five teaspoons of salt in a glass of water and stirred it for a minute. After stirring, the salt disappeared. What had happened to the salt?

The salt dissolved in the water.

Q4

(1) Helen used a screen to separate a mixture of gravel, sand and water. Why did the sand go through the screen but not the gravel?
(Expected answer) Because of the particle size of the sand that made it to pass through the screen unlike the gravel its particle size is bigger.

(2) Bonita added 10 g of salt into 100 mL of water and stirred it with a spoon. After the salt dissolved, she did not find any salt particles in the solution. Suggest what would happen to the weight of the salt dissolved in water.

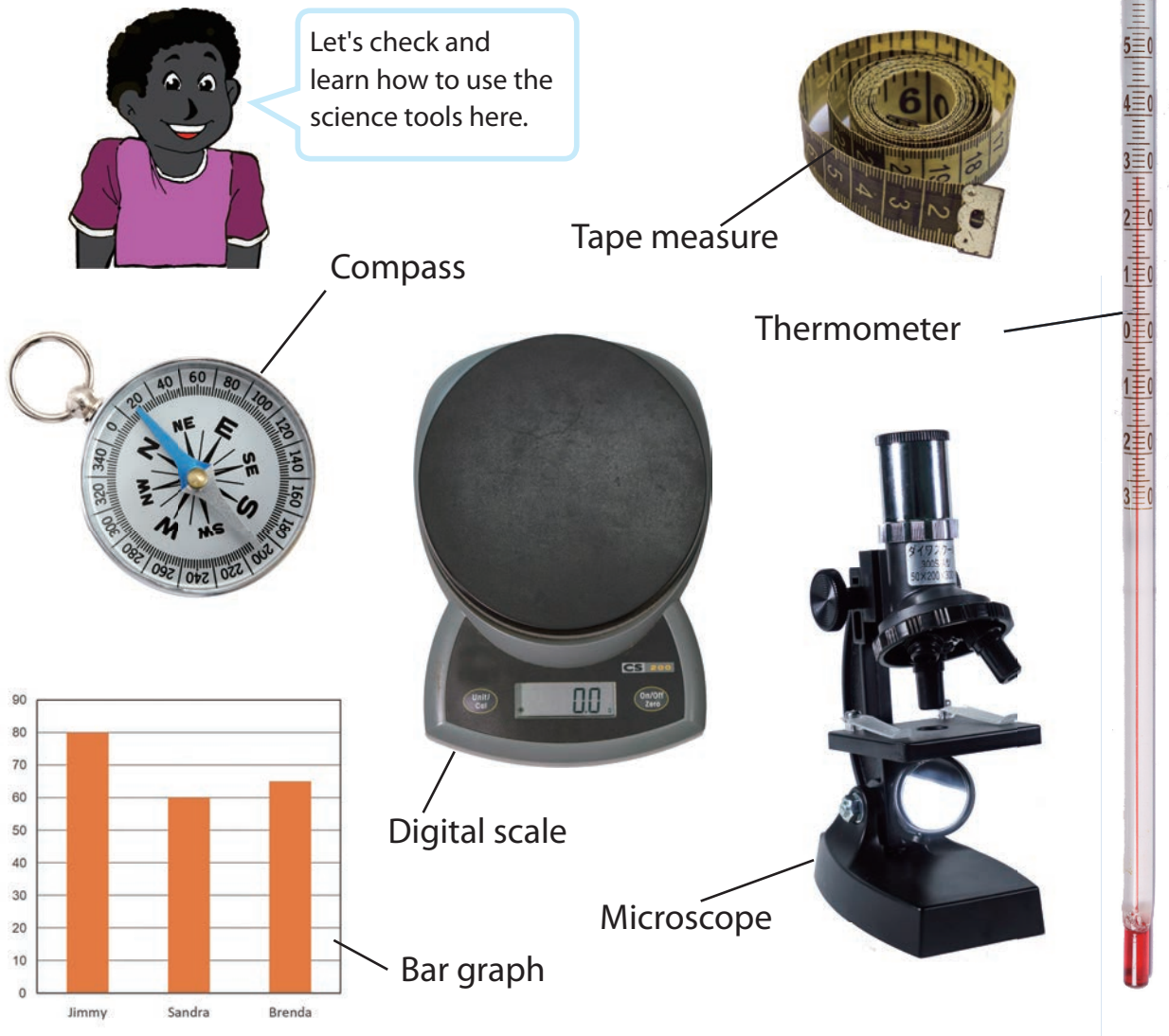
(Expected answer) The weight of the saltwater (solution) is equal to the sum of the weight of water and the substance to be dissolved.

Science Tool Box

1. How to use a Thermometer
2. How to use a Compass
3. How to use a Tape measure
4. How to use a Microscope
5. How to use a Digital scale
6. How to read a Bar graph
7. How to make a Bar graph



Let's check and learn how to use the science tools here.



How to use a Thermometer

1. What is a thermometer?

A thermometer is an instrument used to measure temperature. A thermometer consists of a glass tube with marks on it. When the liquid in the glass tube is heated, it expands and begins to rise up the tube. Temperature is measured in degree Celsius [$^{\circ}\text{C}$].



2. Measuring temperature

STEP 1:

Place the bulb in the place where you want to measure the temperature. Make sure that there are no bright lights or direct sunlight shining on the bulb.

STEP 2:

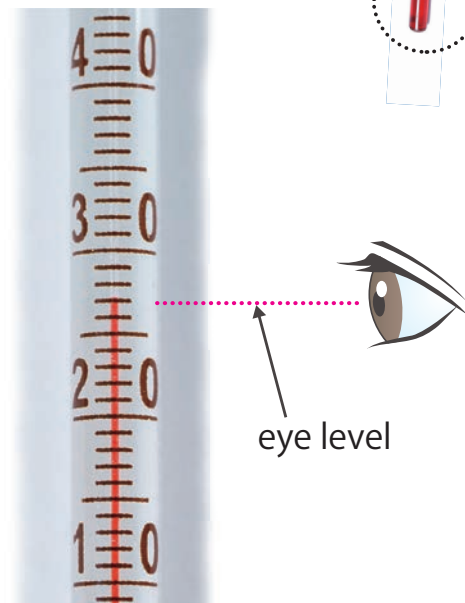
Wait for a few minutes until the liquid in the tube stops moving. Position your eyes at the same level with the top of the liquid in the tube.

STEP 3:

Read the scale line that is closest to the top of the liquid. The thermometer as shown on the right shows 27°C .

Thermometer

bulb



How to use a Compass

1. What is a compass?

A compass is an instrument you use for finding directions (North, South, East and West). It has a dial and a magnetic needle that always points to the north/south. This helps you to locate your position on a map and to set the direction you wish to travel.



Compass

2. Finding directions

STEP 1:

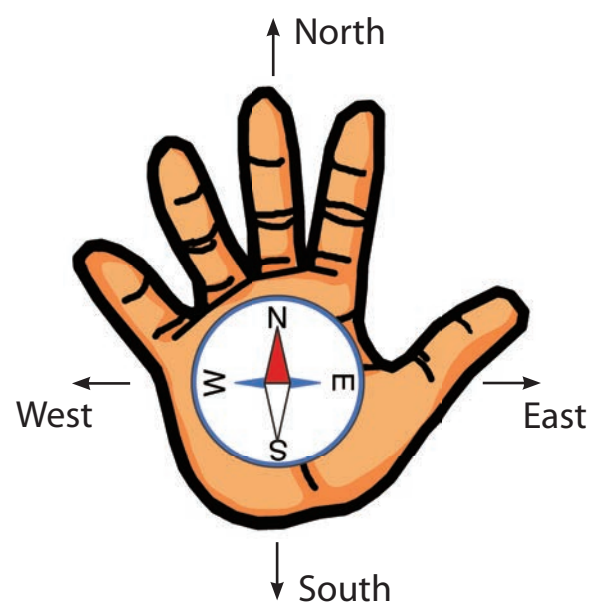
When you want to face North, place the compass flat on your palm and hold your palm in front of your chest as shown in the picture on the right.

STEP 2:

Turn your body until the magnetic needle comes to the North sign on the dial. When the needle overlaps the North sign on the dial, you are facing North.

STEP 3:

Find other directions when you are facing North. Your right side points to East and left side points to West, and your back is facing the South when you are facing North.



How to use a Tape measure

1. What is a Tape Measure?

A tape measure is also called a measuring tape. It is a type of flexible ruler. Tape measures may be in metric (centimetres and metres) and imperial units (Inches and feet).



2. Finding the circumference around your partners head

STEP 1:

Have your partner to stand in front of you with head up straight.

STEP 2:

Hold on one end of the tape that begins with 0 and wrap the tape around your partner's head just above the top of the ears.



STEP 3:

Find the line where the tape measure begins to wrap over itself or the end of the length of the object.

STEP 4:

Record the circumference of your partner's head to the nearest centimetre.



How to use a Microscope

1. What is a Microscope?

A **microscope** is a scientific equipment that is used to see small things that cannot be seen with naked eye. Most **microscopes** use lens, which are pieces of glass or plastic, to magnify objects.

A microscope breaks easily and has to be handled with care. Keep lens clear and avoid touching. Cover the microscope when not in use.

2. Observe some sugar grains

STEP 1:

Move the mirror towards a source of light. Avoid using the sun as a light source.

STEP 2:


Put a few grains of sugar on the slide. Then put the slide containing the sugar grains on the stage of the microscope.

STEP 3:

Look through the eyepiece. Turn the adjustment knob on the side of the microscope to bring the sugar grains to focus.

STEP 4:

To increase the magnification, use the longer lens. To decrease the magnification, use the shorter lens.



How to use a Digital Scale

1. What is a Digital Scale?

A digital scale is an electrical or solar device used to measure the weight of an object or substances precisely. It consists of a platform to place the object on, a liquid crystal display (LCD) that shows the reading (weight) of the object and the switch on or off button.

Platform

Liquid Crystal Display (LCD)

Switch



2. Measuring Weight

STEP 1:

Turn your digital scale on and wait until the reading is set to 0.0 g



STEP 2:

Place whatever needs to be weighed on the scale gently. Observe the display screen on the scale. Make sure to keep the contents steady until it stops at a certain reading.



STEP 3:

Read the measurement on the scale according to the unit given, for example in grams. The weight of the object on the scale would read as 107.0 grams.



How to read and make a Bar Graph

1. What is a Bar Graph?

A bar graph helps to compare data by using bar to represent numbers. In 2.1, it shows how to read a bar graph. In 2.2, it shows how to make a bar graph to compare the weight of three students.

2.1 Reading a Bar Graph

STEP 1:

Read the title of the bar. What is the bar graph about?

STEP 2:

Study the bottom part of the graph called the horizontal axis labeled 'Student' that shows the name of students; Michael, Raphaella and A'alia.

STEP 3:

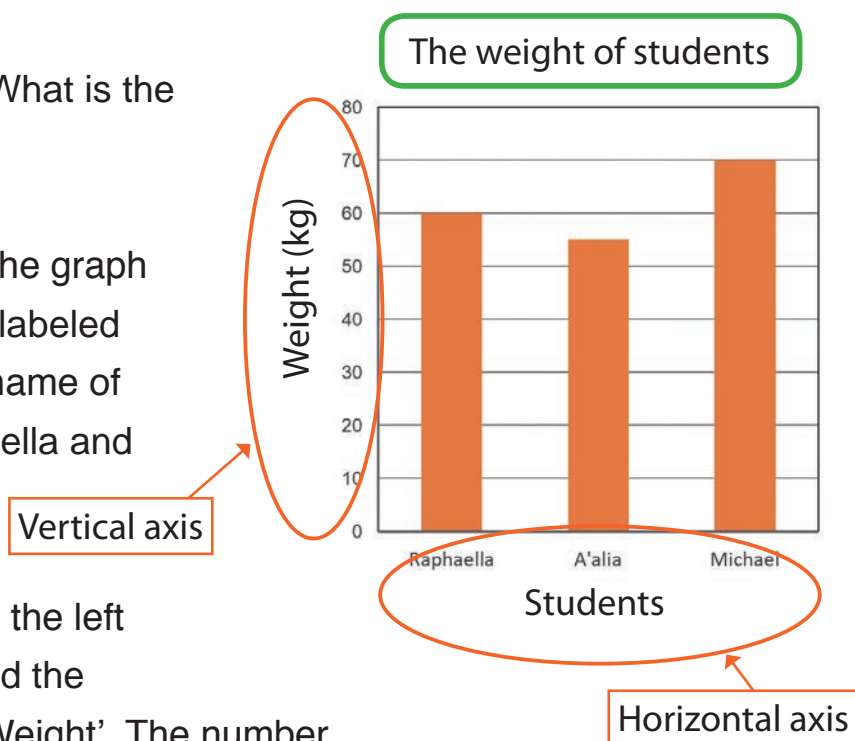
(1) Study the numbers on the left side of the graph called the vertical axis labeled 'Weight'. The number represents the weight in kilograms.

(2) The highest represented number is 80 kg. Between any two numbers example between 30 and 40 the interval amount is 10 kg.

STEP 4:

(1) Study the bar graph. Look at the bar labeled as 'Raphaella' and move across to the vertical axis to identify the weight in numbers. The bar shows that the weight of Raphaella is 60 kg.

(2) Read the question asked. Example: Which student is the heaviest? Compare all the heights of the bars. Follow the highest bar down to identify the name of the student on the horizontal axis. Michael is the heaviest among the students and his weight is 70 kg.



2.2 Making a Bar Graph

Jimmy weighs 80 kg, Sandra weighs 60 kg and Brenda weighs 65 kg. The table shows their weight in kilograms. Use the data in the table to make a bar graph showing their weights.

Student	Weight (kg)
Jimmy	80
Sandra	60
Brenda	65

STEP 1:

Title the graph. The title should help the reader understand what the graph describes.

STEP 2:

Choose a scale and mark equal intervals. The vertical scale should include the least value and the greatest value in the set of data.

STEP 3:

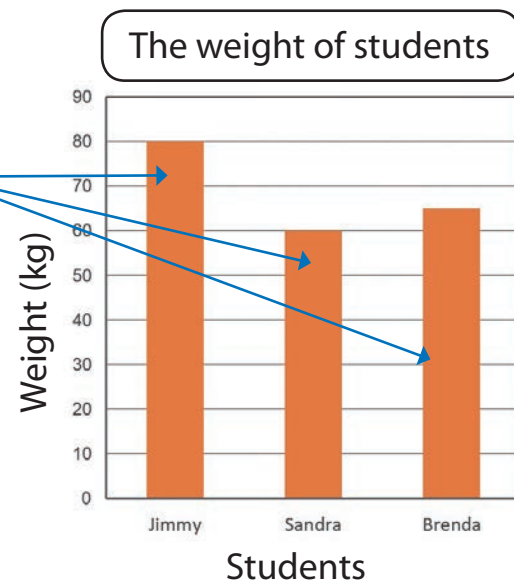
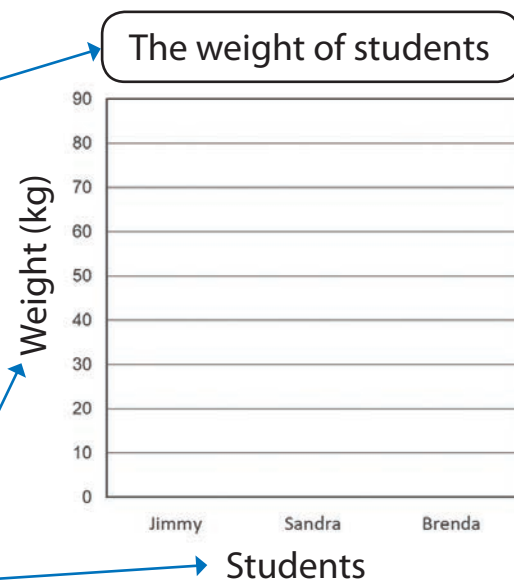
Label the vertical axis 'Weight' (kg) and horizontal axis 'Students'. Space the students' names equally.

STEP 4:

Carefully draw the graph using the data. Depending on the interval you choose, some weights may appear between numbers.

STEP 5:

Check each step to make sure that the data in the table matches the bars you have made with the correct weights.



Glossary

Anther is the male reproductive part that produces and stores pollen grains.	70
Artery is the blood vessel that carries blood away from the heart.	148
Atrium is a heart chamber that receives blood from the body or the lungs.	146
Axis is an imaginary line at which a body rotates.	116
Aveoli are the millions of tiny balloon-like air sacs in the lungs.	140
Bacteria are single – celled organisms that are not a plant or an animal.	18
Blood vessels are tubes that the blood flows through to get to the different parts of our body.	148
Breathing is the process of taking air in and out of the body.	140
Capillaries are the smaller and tiny vessels that connects the arteries and veins.	148
Carnivore is an animal that eats only animals.	12
Cell is the basic structure that makes up all living things.	148
Chambers are the spaces consist two atriums and two ventricles of the heart. ...	146
Chemical energy are energy stored in foods, batteries and fuels.	100
Circulatory system is a network of organs that transport oxygen and nutrients to and carbon dioxide from the cells throughout our body.	148
Constellation is a group of stars that form a particular pattern.	88
Consumers are animals that consume other plants and animals in a food chain.	12
Contact forces are forces that take place when two objects are physically interacting with each other by touching.	48
Decomposer are organisms that break down dead animals and plants.	18
Deposition is the dropping of sediments moved by water, wind and ice.	30
Diaphragm are is a muscle that helps to makes our lungs larger and smaller as we breathe air in and out.	142
Direction is the way or path something moves.	52
Dissolve is to become broken up or absorbed by a liquid until it cannot be seen to form a mixture.	168
Earthquake is a sudden of movement of Earth’s surface often causing severe damage.	32
Ecosystem is a community of living things and non-living thing interacting together to support each other.	16
Electromagnet is a type of magnet in which magnetic field is produced by an electric current flowing a coil.	125

Erosion Is the movement of sediments from one place to another caused by wind, running water etc.	28
Evaporation method is a way for separating a solid from a liquid in a mixture by evaporating the liquid substance.	164
Fertilisation is the joining of the male reproductive cell and the egg cell.	74
Filament is the stalk that holds up the anther.....	70
Filtration is the method for separating a solid from a liquid by using a filter.	162
Food chain the path of food energy from plants to animals.	11
Gravitational potential energy is the energy stored in an object depending on its height from the ground.	98
Gravity is a non-contact force that attracts objects towards each other.	50
Haemoglobin are the red colour particles that are contained in the red blood cells to carry oxygen.	150
Heart are is a muscle about the size of our fist that is located within our rib cage to the left of the chest.	146
Herbivore is an animal that eats only plants.	12
Heredity is the process through which traits are passed on from parents to young organisms.....	76
Kinetic energy is the energy of a moving object.	96
Landslide is the rapid downhill movement of large amount of rock and soil.....	32
Lungs are the main organs of the respiratory system in most animals living on land.	140
Magnitude of force is the amount of force.	52
Mass is a measurement of the amount of matter in an object.	55
Microscope is an instrument that is used to observe very small things that cannot be seen with our naked eyes.	147
Mixture is a matter that is made up of two or more substances that are combined physically.	158
Moon phases is the changes in the amount of the lit areas of the moon that can be seen from the earth.	118
Newton (N) is the unit of force.	51
Non-contact forces are forces that take place when two objects are not in contact with each other but act through the space between them. ...	48
Omnivore is an animal that eats both plants and animals.	12
Orbit is an orbit is a path that an object takes in space around another object. ...	116

Glossary

Organ is a part of the body that has a specific form and function.	140
Ovary is the female reproductive part that produces and contains the eggs.	70
Ovule is the structure that gives rise to and contains the female reproductive cells.	70
Pistil is the female reproductive part of a flower.	150
Plasma is the component of blood which is consist of liquid.	150
Platelets are tiny cells of blood that help blood clot in order to stop bleeding, to heal cuts and other injuries.	150
Point of application is the location at which a force is applied to an object.	52
Pollen grains are microscopic structures that carry the male reproductive cell of plants.	70
Pollen tube is the tube through which sperm from the pollen reaches the egg cells and fertilises the plant to form seeds.....	74
Pollination is the transfer of pollen grains from the anther to the stigma of a flower.	71
Predator is an animal that hunts and eats other animals.....	12
Prey is an animal that is hunted and eaten by other animals.	12
Producers are living things that produce their own food.	12
Red cells are the red disc shaped cells in the blood containing haemoglobin to carry oxygen from the lungs to all parts of the body..	150
Respiratory system is a group of organs in our body that enables us to breathe.	140
Revolution is the movement of an object in a circular or elliptical course around another.....	116
Rotation is the action of rotating on an axis or centre.	116
Sedimentary rocks are rocks that are formed from layers of sediments call strata, usually at the bottom of rivers, lakes and ocean.	39
Sediments are the materials that are carried by water or wind and deposited on the surface of the land or the seabed and may in time become into rocks.	26
Solution is a mixture where one or more substances are dissolved evenly into another substance.	168
Stamen is the male reproductive part of a flower	70
Star is a giant ball of hot gases.....	84
Stigma is the female reproductive part where pollen grains fall on	70
Strata is the horizontal layers of sediment.	36
Style is the long stalk that connects the stigma to the ovary.	70

Substance is a matter that is made of only one kind of matter.	158
Trachea is is the tube that which connects the throat to the lungs.	140
Transpiration is the process of plants losing water from the leaves into the air in the form of water vapour.	62
Vein is the blood vessel that carries blood back to the heart.	148
Ventricle is a chamber that pumps blood to the lungs or the body.	146
Volcano is an opening (usually on a mountain) on the Earth's surface which explodes to allow hot magma, volcanic gas and ash to escape. ...	32
Weathering is a process where rock is broken down into smaller pieces over time.	26
Weight is a force caused by gravity.	55
White cells are blood cells for our body's immune system to defend the body against bacteria, viruses and other infectious diseases..	150

Glossary

Page number corresponds to Grade 5 Textbook

Accelerate is to increase in speed.	24
Adaptation is the use of body part or a behaviour that helps an organism survive in its environment or a new environment.	148
Boiling point is the temperature at which a liquid changes into a gas.	76
Carbon dioxide is a colourless and odourless gas produced by people or animals when they breathe out.	12
Chemical change is a change that produces new kinds of matter.....	58
Condensation is the process that causes a matter to change from gas to liquid.	76
Core is the hottest, innermost layer of the Earth.	114
Cotyledon is the part of a plant that stores food.	164
Crust is the thinnest outer layer of the Earth.	114
Decelerate is to reduce in speed or slow down.	24
Degrees Celsius is the unit of measurement used to measure temperature.	192
Desert is a large, hot, dry area of land with very little water and very few plants. ...	150
Electric current is the flow of electricity.	98
Embryo in animals is an early developmental stage of an animal while it is within the mother's womb (uterus) or in the egg.	88
Embryo in plants is the tiny plant inside the seed.	164
Energy pyramid is a representation of the flow of energy from one energy level to another.	16
Evaporation is the process that causes a matter to change from liquid to a gas. ...	76
Food web consists of several food chains linked to each other.	16
Fossil is the remains of once a living thing.	124
Freezing is the process that causes a matter to change from a liquid to a solid. ...	76
Freezing point is the temperature at a certain point where liquids start to change to solid.	74
Freshwater habitats are natural water sources that do not contain salt.	136
Friction is the force that occurs when two surface of objects rub against each other from opposite directions.	24
Germination is the process of the seed growing into a seedling.	165
Grassland is an area mostly covered by grasses with few or no trees.	141
Habitat is the part of a natural environment where a plant or an animal lives.	134
Igneous rock is a rock formed when melted rock from inside the Earth cools and hardens.	118

Page number corresponds to Grade 5 Textbook

Magma is melted rock form in the Earth or a result of volcanic eruption.	118
Mantle is the thick, hot layer of the Earth.	114
Melting is the process that causes a matter to change from a solid to a liquid. ...	76
Melting point is the temperature at a certain point where solids start to melt.	74
Metamorphic rock is a rock formed when a rock inside the Earth has been changed by heat and pressure.	118
Mineral is a valuable or useful substance that is dug out of the ground.	114
Motor is an electrical device that produces power to rotate things using electricity.	97
Ocean habitat is the area with salty water.	138
Organism is any living thing such as plant, animal, fungus and other living things.	144
Parallel circuit is a circuit in which the electric current flows in two or more paths.	100
Photosynthesis is the process by which plants make their own food (starch) from carbon dioxide and water by using light.....	176
Rainforest habitat is an area with a lot of rain, warm climate and tall trees.....	140
Reproduction is the process where living things produce young ones similar to themselves.....	83
Rock is a naturally formed, non-living material as part of the Earth crust.....	114
Seed coat is the hard outer layer of the seed covering the embryo and the cotyledon.	164
Series circuit is a circuit in which the electric current flows in one path.	164
Solar energy is the energy that comes from the Sun.	12
Sublimation is the direct change of state from solid to gas.....	79
Starch is a substance made by plants to store energy in foods such as rice, bread, kaukau and potato.	164
Temperature is a measure of how hot or cold a matter is.	192
Thermometer is an instrument that is used to measure temperature in degrees Celsius.....	192
Trait is a feature or characteristic of a living thing.	90

Basic Science Instruments

Basic science instruments introduced in the textbook are listed below.



1



2



3



7



4



5



6



9



8

1 Magnifying lens

2 Measuring tape

3 Beaker

4 Thermometer

5 Burner

6 Compass

7 Microscope

8 Beam balance

9 Spring balance

10 Scale

11 Enamel wire

12 Cell holder

13 Switch

14 Wire

15 Bar magnet



10



11



12



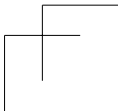
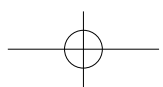
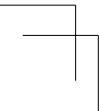
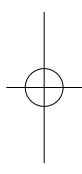
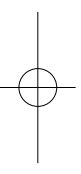
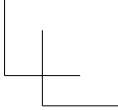
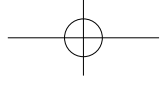
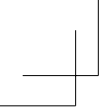
13



14



15



Science Grade 6 Teacher's Manual Development Committees

The Science Teacher's Manual was developed by Curriculum Development Division (CDD), Department of Education in partnership with Japan International Cooperation Agency (JICA) through the Project for Improving the Quality of Mathematics and Science Education (QUIS-ME Project). The following stakeholders have contributed to manage, write, validate and make quality assurance for developing quality Textbook and Teacher's Manual for students and teachers of Papua New Guinea.

Joint Coordinating Committee members for QUIS-ME Project

Dr. Uke Kombra, Secretary for Education - Chairperson, Mr. Walipe Wingi, Deputy Secretary - Deputy Chairperson, Mr. Baran Sori, Mr. Samson Wangihomie, Mr. Titus Romano Hatagen, Mr. Godfrey Yerua, Mrs. Annemarie Kona, Mr. Camillus Kanau, Mr. Joseph Moide, Mr. Peter Kants, Late Mr. Maxton Essy, Mr. Steven Tandale, Ms. Hatsie Mirou, Mr. Paul Ainui, Mr. Packiam Arulappan, Mr. Allen Jim, Mr. Nopa Raki, Mr. Gandhi Lavaki, Mr. John Kakas, Mrs. Philippa Darius, Mr. Alex Magun, Ms. Mary Norrie, Mr. James Namari, Ms. Kila Tau, Mr. Moses Hatagen Koran, Ms. Colette Modagai, Ms. Dorothy Marang, Mr. Dan Lyanda, Representatives from Embassy of Japan and JICA PNG Office, Mr. Akinori Ito, MPS, Mr. Chiko Yamaoka and other Project Experts

Steering Committee members for QUIS-ME Project

Mrs. Annemarie Kona, First Assistant Secretary - Chairperson, Mr. Steven Tandale - Assistant Secretary, CDD - Deputy Chairperson, Ms. Hatsie Mirou, Mr. Paul Ainui, Mr. Gandhi Lavaki, Mr. John Kakas, Mrs. Philippa Darius, Mr. Alex Magun, Ms. Mary Norrie, Mr. James Namari, Ms. Kila Tau, Mr. Moses Hatagen Koran, Ms. Mary Phillips, Mr. Nopa Raki, Mr. Geoff Gibaru, Ms. Jean Taviri, Mr. Glen Benny, Mr. Akinori Ito, MPS, Mr. Chiko Yamaoka, Mr. Satoshi Kusaka, Mr. Ryuichi Sugiyama, Mr. Kenichi Jibutsu, Ms. Masako Tsuzuki, Dr. Kotaro Kijima, Ms. Kyoko Yamada and Representatives from Textbook writers and JICA PNG Office

Curriculum Panel

Mr. Steven Tandale, Assistant Secretary - Chairperson, Mr. Gandhi Lavaki, Mr. John Kakas, Mrs. Philippa Darius, Mr. Anda Apule, Mr. Alex Magun, Ms. Mary Norrie, Mr. Gilbert Ikupu, Mr. John Wek, Ms. Betty Bannah, Ms. Mirou Avosa, Mr. Rupuna Pikita and Ms. Clemencia Dimain

Editorial & Contents Supervisors

Mr. Ryuichi Sugiyama, Mr. Kenichi Jibutsu, Prof. Masakazu Kita, Dr. Kotaro Kijima, Mr. Susumu Komazawa, Mr. John Kakas, Mr. Moses Hatagen Koran, Prof. Hiroaki Ozawa, Ass. Prof. Kazuyuki Tamura and Prof. Yasuhiko Makino

Writers & Proofreaders (Curriculum officers & Textbook writers - Science Working Group)

Mr. John Kakas - Science Working Group Leader, Mr. Moses Hatagen Koran, Mr. Emmanuel Ragu, Mr. Jimmy Pulpulis, Mr. Michael Kwadogi, Ms. Sandra Uramani, Ms. Brenda Kautu, Ms. Raphaella Barau and Ms. A'alia Nissar

Chief Proofreader, Illustrations, Photos & Desktop Publishing

Ms. Clemencia Dimain (Chief Proofreader), Mr. Micheal John, Mr. Fumihiko Kobori, Nihon Graphics Co.,Ltd. (Illustrations), Mr. Angus Fraser, Mr. Rocky Roe, Wildlife Conservation Society, Piku Biodiversity Network Inc., Mr. Chiko Yamaoka, Dr. Kotaro Kijima, Mr. Makoto Onohara, JICA Volunteers, Aflo, amana images, CORVET, JAXA/NASA, NASA, OASIS, PIXTA, PPS (Photos), Mr. David Gerega, Mr. Vitus Witnes (Graphic designers), HIZU INC., Mr. Haruo Yoshida, Ms. Ayako Sakano (Desktop Publishing) and Gakko Tosho Co.,Ltd. (Photos and illustrations)


Validation Team (Science working group & Teachers from pilot schools)

Ms. Heidi Supa, Ms. Ikai Koivi, Ms. Joan Maiti, Miss. Aloisia Charles, Ms. Idau Rea, Ms. Freda Bonifas, Ms. Boio Gurina, Ms. Joyce Dick, Ms. Sussie Kipak, Ms. Kila Vela Ymana, Mr. Christopher Awai, Mr. John Otai

Cooperation

Japan International Cooperation Agency (JICA), Department of National Planning & Monitoring (DNPM), PNG Conservation and Environment Protection Authority (CEPA-JICA Biodiversity Project), PNG Forest Authority (PNGFA-JICA, PNG-FRIMS Project), Piku Biodiversity Network Inc., Okayama University, Naruto University of Education, Gakko Tosho Co.,Ltd., Bank of Papua New Guinea, Port Moresby Nature Park, Gaire Primary School, Iobuna Kouba Primary School, Koki Primary School, Koiari Park Primary School, St. Therese Primary School, Sogeri Primary School, Tubuseria Primary School and QUIS-ME Project Staff; Ms. Rose Leveni, Mr. Samuel Masa, Ms. Angela Koso, Mr. Robert Silovo, Mr. Benstead Talania, Mr. Pascarl Sury





**From
the People of Japan**