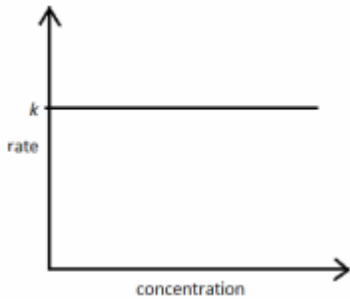
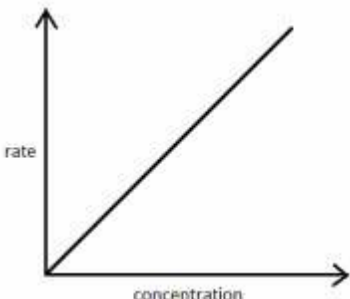
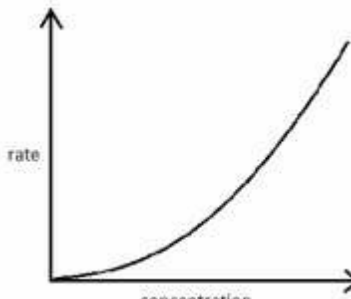




The effect of concentration on rate – Student sheet

To study

The relationship between the concentration of a reactant and the rate of reaction with respect to that reactant can be shown using **rate–time** graphs.

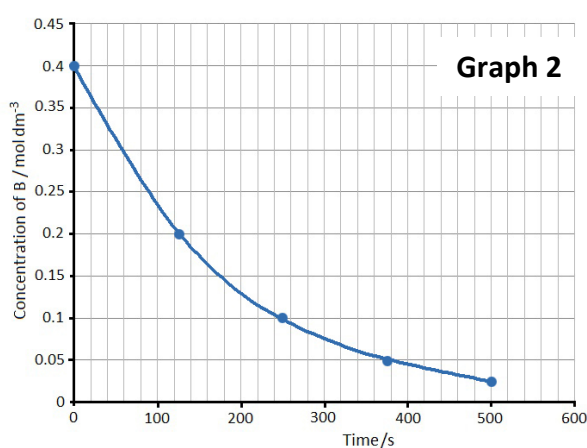
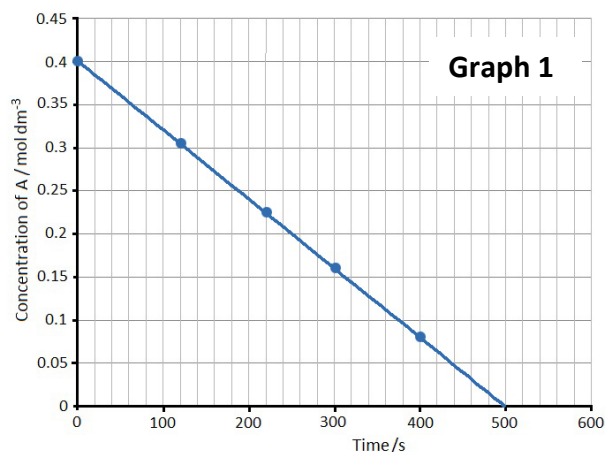
Zero order	First order	Second order
If the rate is not affected by the concentration of a reactant, when you double the concentration the rate stays exactly the same.	If the rate is proportional to the concentration of a reactant, when you double the concentration the rate doubles.	If the rate is proportional to the square of the concentration of a reactant, when you double the concentration the rate goes up 4 times.
$r_A = k$	$r_A = k[A]$	$r_A = k[A]^2$
		

To discuss

Rate cannot be directly measured, so instead chemists often measure the concentration of a reactant or volume of gaseous product as the reaction progresses.

Look at the graphs below. They are the **concentration–time** graphs for two different chemical reactions. Study each graph carefully and decide whether the rate is zero order, first order or second order.

Explain your decision.





The effect of concentration on rate – Student sheet

Method 1 Using a conical flask and a balance

You are going to collect and analyse data to find the order of this reaction with respect to hydrochloric acid.



The calcium carbonate you will use is in the form of marble. Fairly large pieces are used so that the surface area does not change significantly during the reaction. However, the quantity and concentration of hydrochloric acid is such that it is almost all used up during the reaction.

Wear eye protection

- Put the following items on a top-pan balance:
 - small conical flask containing about 10 g of marble in six or seven lumps.
 - measuring cylinder containing 20 cm³ of 1 M hydrochloric acid.
 - plug of cotton wool for the top of the conical flask.
- Pour the acid into the conical flask, plug the top with the cotton wool, and put the measuring cylinder back on the balance pan.
- Allow a few seconds to pass so that the solution is saturated with carbon dioxide. Then start timing and taking mass readings. Record the total mass of the whole reaction mixture and apparatus (m) at intervals of 10 seconds at the start, increasing to 30 seconds, until the reaction is over and the mass no longer changes. Record the final mass (m_{final}).

Record your results in a table like the one below.

Time t/s	Total mass m_t/g	$m_t - m_{\text{final}}/\text{g}$

- When the reaction is over, the total mass of carbon dioxide evolved and lost to the atmosphere can be found by subtracting m_{final} from m_t at time = 0 s. This is proportional to the concentration of the hydrochloric acid at the moment when timing started. So $(m_t - m_{\text{final}})$ is proportional to the concentration of hydrochloric acid at each time t . Complete the third column.
- Plot a graph of $(m_t - m_{\text{final}})$ against t , putting t on the horizontal axis.



The effect of concentration on rate – Student sheet

Method 2 Using a side-arm test tube and a gas syringe

You are going to collect and analyse data to find the order of this reaction with respect to hydrochloric acid.

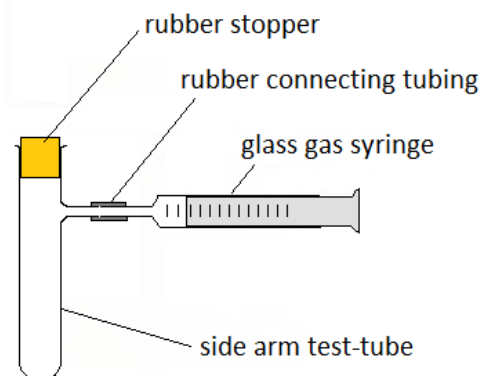


The calcium carbonate you will use is in the form of marble. Fairly large pieces are used so that the surface area does not change significantly during the reaction. However, the quantity and concentration of hydrochloric acid is such that it is almost all used up during the reaction.

Wear eye protection

Take care with the gas syringe

- 1 Set up the apparatus as shown in the diagram.
- 2 Place about 10 g of marble in six or seven lumps in the test tube.
- 3 Use a measuring cylinder to measure 10 cm^3 of 1 M hydrochloric acid.
- 4 Put the acid into the test tube. Allow a few seconds for the solution to become saturated with carbon dioxide. Put the stopper in place and start timing.
- 5 Take readings of volume (V_t) every 30 seconds, until the reaction is over and the volume no longer changes. Record the final volume as well.



Record your results in a table like the one below.

Time t/s	Volume of CO_2 V_t/cm^3	$V_{\text{final}} - V_t/\text{cm}^3$

6 When the reaction is over, the total volume of carbon dioxide collected (V_{final}) is proportional to the concentration of the hydrochloric acid at the moment when timing started. So ($V_{\text{final}} - V_t$) is proportional to the concentration of hydrochloric acid at each time t . Complete the third column.

7 Plot a graph of ($V_{\text{final}} - V_t$) against t , putting t on the horizontal axis.



The effect of concentration on rate – Student sheet

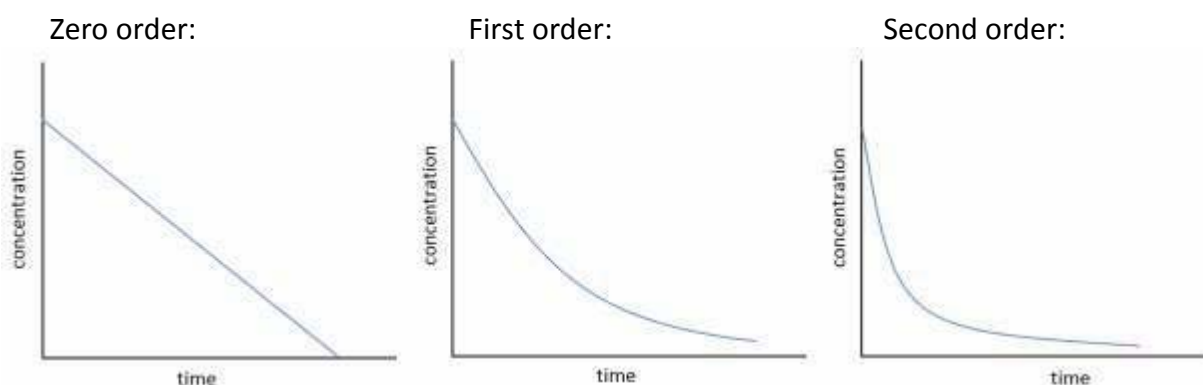
Methods 1 and 2

To discuss

- Are there any anomalous results in your data (outliers)?
- Are you satisfied with the validity of the data you have collected?
- If you think it necessary, repeat the procedure to give you a second set of readings.

To answer

- 1 Describe in words how the rate changes as the concentration of the hydrochloric acid changes.
- 2 Compare the shape of your graph with the shapes of the three graphs below.



Is the reaction of calcium carbonate with hydrochloric acid zero order, first order, or second order with respect to hydrochloric acid? **3** Is the evidence sufficient for you to draw a firm conclusion? (You can use evidence from others in your class too if necessary.)

- 4 Write a rate equation for the reaction.
- 5 Draw and complete a table, like the one below, to compare collision theory and rate equations as models for the rate of a reaction.

Collision theory	Rate equation

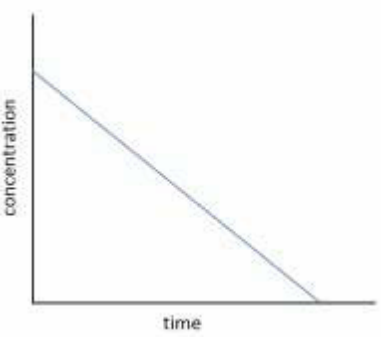
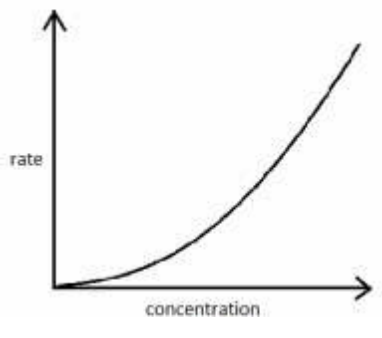
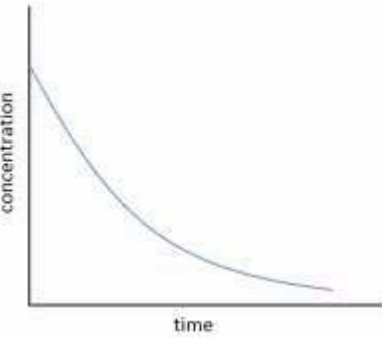
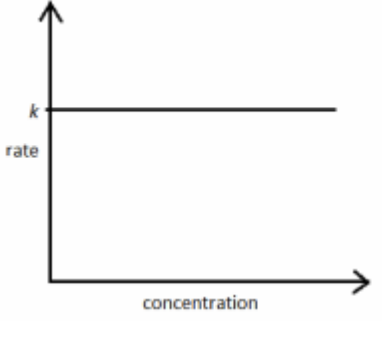
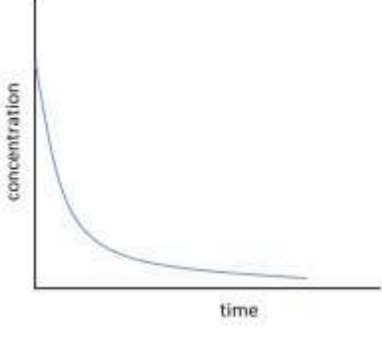
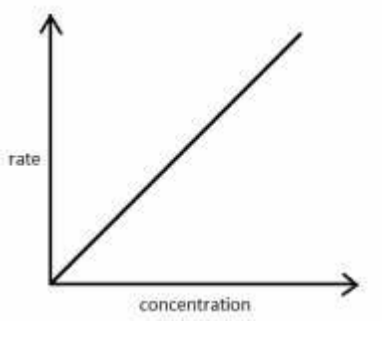


The effect of concentration on rate – Student sheet

Card sort

To do

Cut out the cards below and arrange into three groups; zero order, first order and second order reactions.

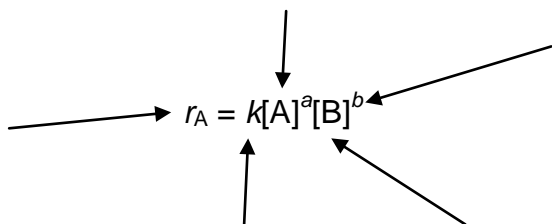
Zero order	First order	Second order
		<p>The rate is proportional to the concentration of a reactant. When you double the concentration the rate doubles.</p>
		<p>The rate is proportional to the square of the concentration of a reactant. When you double the concentration the rate goes up four times.</p>
		<p>The rate is not affected by the concentration of a reactant. When you double the concentration the rate stays exactly the same.</p>
$r_A = k[A]$	$r_A = k$	$r_A = k[A]^2$



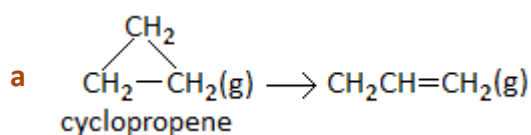
The effect of concentration on rate – Student sheet

The effect of concentration on rate: Assessing learning

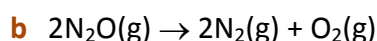
1 Label the following equation as fully as you can.



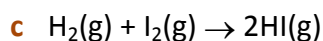
2 Information about the effect of changes of concentration on the rates of some reactions is given below. For each example, use the information to write the rate equation for the reaction.



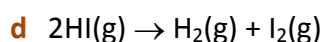
The rate is proportional to the concentration of cyclopropene.



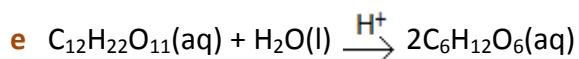
The rate is proportional to the concentration of nitrogen(I) oxide.



The rate is proportional to the concentration of hydrogen and to the concentration of iodine.



The rate is proportional to the square of the concentration of hydrogen iodide.



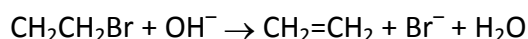
The rate is proportional to the concentration of sucrose and to the concentration of hydrogen ions.



The effect of concentration on rate – Student sheet

3 Use the rate equation for the following reactions to write down the order of the reaction with respect to each of the reactants.


a The elimination of hydrogen bromide from bromoethane.



$$\text{Rate}_{(\text{CH}_3\text{CH}_2\text{Br})} = k[\text{CH}_3\text{CH}_2\text{Br}]$$

What would be the effect on the rate of doubling the concentration of hydroxide ions?

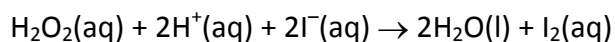
b One of the propagation steps in the radical substitution of an alkane by chlorine.



$$\text{Rate}_{(\text{CH}_3\cdot)} = k[\text{CH}_3\cdot][\text{Cl}_2]$$

What would be the effect on the rate of doubling the concentration of the methyl radicals *and* the chlorine gas?

4 When hydrogen peroxide solution reacts with iodide ions in aqueous acid, iodine is liberated.



The following table gives some experimental results for the reaction.

Run	Initial reactant concentration / mol dm ⁻³			Initial rate of formation of I ₂ / mol dm ⁻³ s ⁻¹
	[H ₂ O ₂]	[I ⁻]	[H ⁺]	
1	0.010	0.010	0.10	1.75 × 10 ⁻⁶
2	0.020	0.010	0.10	3.50 × 10 ⁻⁶
3	0.030	0.010	0.10	5.25 × 10 ⁻⁶
4	0.030	0.020	0.10	1.05 × 10 ⁻⁵
5	0.030	0.020	0.20	1.05 × 10 ⁻⁵

a Use the results of runs 1, 2 and 3 to deduce the order of reaction with respect to H₂O₂(aq). Explain how you arrived at your answer.

b Use the results of runs 3 and 4 to deduce the order of reaction with respect to I⁻(aq), giving an explanation as in part **a**.


c Use the results of runs 4 and 5 to deduce the order of reaction with respect to H⁺(aq), giving an explanation as before.

d What is the rate equation for the reaction?



The effect of concentration on rate – Teacher guidance

Learning structure of the lesson

<p>The big picture</p> <p>This lesson sequence is designed to exemplify a model-based inquiry approach to practical work in which students evaluate collision theory and rate equations as models for explaining rates of reactions.</p> <p>Understanding the rates of chemical reactions is important for controlling reactions in industry. In this lesson sequence students will evaluate collision theory as a model for predicting rates of reactions. They then collect data to determine the order of the reaction of calcium carbonate and hydrochloric acid, and deduce the rate equation. They use the rate equation to make predictions.</p>		<p>Age range: 16–18</p> <p>Timing: 1 h 40 min (If the lesson needs to be divided into two parts, a good place to break is just before students start the practical activity).</p>
<p>Learning episode 1 (teacher-led) 10 mins</p> <p>Class discussion about why chemists study rates of reaction. Introduce learning outcomes for lessons.</p> <p style="text-align: center;">↓</p>	<p>Learning outcomes</p> <p>Students will be able to:</p>	<p>Equipment and materials</p> <p>Teacher guidance Practical guidance Slide presentation Interactive Student sheet</p> <hr/> <p>Per class</p> <p>Eye protection Marble, acid washed chips, 0.5–1 g each Hydrochloric acid (1 M), 50 cm³ Beaker (250 cm³) Stopclocks</p> <hr/> <p>Per group/pair</p> <p>Hydrochloric acid (1 M), 20 cm³ Cotton wool Measuring cylinder (25 cm³) Conical flask (100 cm³) Balance to weigh to +/- 0.001 g</p> <p>or</p> <p>Hydrochloric acid (1 M), 10 cm³ Measuring cylinder (10 cm³) Test tube with side arm, 150 x 25 mm, or equivalent Glass gas syringe (100 cm³) Rubber stopper to fit test tube Rubber connecting tubing</p> <p></p> <p>Refer to the health and safety advice and practical guidance</p>
<p>Learning episode 2 (student-led) 15 mins</p> <p>Demonstrate the reaction of calcium carbonate with hydrochloric acid. This is followed by an activity in which students organise what they already know about rates of reaction.</p> <p style="text-align: center;">↓</p>		
<p>Learning episode 3 (teacher-led) 20 mins</p> <p>Introduce a mathematical model for describing rates of reaction and use the interactive to ensure students know how to find half life.</p> <p style="text-align: center;">↓</p>	<ul style="list-style-type: none"> evaluate different models for explaining the rates of reactions 	
<p>Learning episode 4 (teacher-led) 25 mins</p> <p>Present the problem to students who then follow one of two practical methods to find the order of the reaction between calcium carbonate and hydrochloric acid.</p> <p style="text-align: center;">↓</p>	<ul style="list-style-type: none"> use experimental data to identify how the concentration of each reactant affects the rate of a reaction 	
<p>Learning episode 5 (teacher-led) 15 mins</p> <p>Students analyse the collected data to find the order of reaction and write the rate equation for the reaction.</p> <p style="text-align: center;">↓</p>		
<p>Learning episode 6 (student-led) 15 mins</p> <p>The model is generalised and students see how they can write a rate equation for any reaction, given the relevant data.</p> <p>A card sort activity can be used to reinforce learning.</p> <p>Key words</p> <p>Rate equation, [A], order of reaction, <i>k</i></p>		



The effect of concentration on rate – Teacher guidance

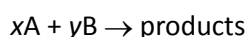
Prior knowledge

It is assumed that students know the following.

- The rate of a reaction can vary with changes in temperature, concentration, surface area, and with the presence of catalysts.
- Collisions are required for chemical reactions to take place and the rate depends on the number of successful collisions per second.

Background information

In a reaction of the type



the rate of change of concentration of substance A will be found by experiment to follow a mathematical expression of the form:

$$r_{\text{A}} = k[\text{A}]^m[\text{B}]^n$$

An expression of this kind is called a rate equation. The terms in the equation are defined below.

Sometimes the rate equation includes the concentration of substances which do not appear as reactants in the chemical equation. These substances may be, for example, catalysts. Catalysts are not reactants but they do affect the rate.

Terminology

The terms which students need to understand and use in this lesson are:

rate equation – this is used to show how rate varies with concentration of reactants. It takes the form: $\text{rate} = k[\text{A}]^m[\text{B}]^n$.

[A] – the square brackets [] around substance A denote concentration of A in mol dm^{-3} .

order of reaction – the order of reaction is the power to which the concentration of a reactant is raised in the rate equation. If $\text{rate} = k[\text{A}]^m[\text{B}]^n$ the order of reaction with respect to A is m, and the order of reaction with respect to B is n. Any term raised to the power zero equals 1, so for a zero order reaction, $\text{rate} = k[\text{A}]^0 = k$.

k – a constant of proportionality called the rate constant.

Differentiation

For students requiring additional support in recalling what they already know about the collision theory, the following table can be copied onto cards and cut out. These form the basis of an activity which could be used prior to the lesson or as a further starter.

There are six cards each featuring a different reaction. Place students in groups of three or four and give each group one or two cards. Ask them to explain what is going on as fully as possible using collision theory.



The effect of concentration on rate – Teacher guidance

Sugar dissolves quicker in hot water than cold water	A lump of flour is difficult to catch alight but an explosion in a custard factory ripped the place apart
Magnesium reacts very slowly with cold water but extremely vigorously with steam	A jelly baby can be added to molten potassium chlorate and a violent reaction occurs. It is not safe to use sugar for this reaction.
Chlorine can be made by reacting concentrated hydrochloric acid with potassium manganate(VII), but the reaction is very slow with 1 mol dm ⁻³ acid	In the Haber process to make ammonia, the reaction is carried out at high pressures: $3\text{H}_2(\text{g}) + \text{N}_2(\text{g}) \rightleftharpoons 2\text{NH}_3(\text{g})$

Students' explanations should include points such as:

- An increase in the concentration/pressure leads to an increase in the number of collisions. This leads to an increased chance of successful collisions taking place which will increase the rate of the reaction.
- An increase in temperature leads to an increase in both the number of collisions and the energy with which they collide. This leads to an increased chance of successful collisions taking place. Maxwell Boltzmann graphs could be used.
- An increase in particle size increases the number of collisions. This leads to an increased chance of successful collisions taking place which will increase the rate of the reaction.
- For the custard power factory see:
www.guardian.co.uk/uk/2006/oct/22/schools.education
- For the jelly baby reaction see www.cleapss.org.uk. The sugar has a higher surface area and the reaction is so fast as to be unsafe. When the sugar is trapped in the jelly the reaction speed is slower and the reaction can be carried out safely in the laboratory.
- For the reaction between potassium manganate(VII) and glycerol see:
www.rsc.org/learn-chemistry/resource/res00000742/spontaneous-exothermic-reaction

Optional extension activities

This lesson sequence is probably best followed up by giving students the opportunity to carry out another reaction to find the order, probably involving two reactants this time.

One possibility would be the kinetics of the reaction between iodine and propanone in acid solution. See Nuffield Advanced Chemistry Teachers' guide page 157 and student book page 249. Download this from the STEM centre eLibrary: <http://stem.org.uk/cx36t>

The concept of the rate-determining step could be introduced, as could various methods for obtaining data for the study of reaction rates.



The effect of concentration on rate – Teacher guidance

Lesson details – lesson 1

Slide 2

Chemical reactions can be ...

fast...



...or slow.



Task: Show **slide 2** and ask students to discuss why chemists study rates of reaction.

There are three main reasons for studying rates of reaction:

- 1 Observing that reactions can take place at different rates is enough to challenge the curiosity of chemists and encourage them to study rates.
- 2 Chemists want to understand how to change the rate of a reaction. This may be essential in industry when considering the economics of a manufacturing process.
- 3 Knowledge of the effects of concentration and temperature on the rate of a reaction provides important evidence about the mechanism – the individual steps by which a reaction takes place.

Students are unlikely to identify the third point on their own, but may have previously studied some organic reaction mechanisms.

Slide 3

Learning outcomes

You will be able to ...

- evaluate different models for explaining the rates of reactions
- use experimental data to identify how the concentration of each reactant affects the rate of a reaction



Explain: Use **slide 3** to present the learning outcomes for the lesson.

Task: Show students a quick demonstration of the reaction between hydrochloric acid and marble chips (see **Practical guidance**). Ask 'What do you already know about this reaction and the rate of the reaction?'

Students will almost certainly have studied the reaction of hydrochloric acid and marble chips before so it is important to give them time to explain what they already know about it before taking the topic on further.

Task: Working in groups of three or four, students discuss and write down as much as they can about this reaction (including diagrams, drawings and equations), noting down each idea on a separate piece of paper.



The effect of concentration on rate – Teacher guidance

Slide 4

What you already know

Organise what you know about the reaction of marble chips with hydrochloric acid into three categories.

Practical techniques
equipment and methods

Observations / data / summaries of data
including from previous experimental work, e.g. graphs, or statements summarising a trend/pattern

Explanations
inferences, models, type of reaction, equations



Task: Ask students to organise their ideas into the three categories listed on **slide 4**.

They do not need to have something in every category. Where one idea falls into two categories, the content can be rewritten onto two pieces of paper.

Task: Get students to share some of their ideas with the class. Ensure that they all understand the difference between data and explanations.

Slide 5

What is rate of reaction?

In a chemical reaction, reactants are used up and products form.

A + B → products

In this reaction **A** and **B** are the reactants. They are used up.

Rate of reaction is the rate at which reactants are converted to products.



Optional: slide 5 'What is rate of reaction?' could be used at this point.

Task: Students' explanations are likely to include models. Collision theory is a model for explaining rates of reaction. Draw together what students know about collision theory.

Questions for discussion:

- Does the collision theory model have any limitations?
- What kind of predictions does it allow you to make?
- What kind of predictions can you not make?

Differentiation: If students are having trouble identifying limitations, ask them to draw a graph predicting the volume of CO₂ gas produced by the reaction of marble with acid, against time. How accurately can they draw the graph? They will not be able to put numbers on the graph (even if they know the mass of marble and concentration of acid) and they do not know the exact gradient of the line at any point.

Explain: Collision theory goes part of the way to explaining the effect of concentration on the rate of a reaction, but does not allow you to make quantitative predictions. That is, if you double the concentration, what happens to the rate: does it double? does it treble?



The effect of concentration on rate – Teacher guidance

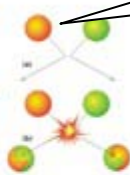
Slide 6

Models of rate

Collision theory can make **qualitative** predictions. It can predict how the rate may change with changing conditions – but not by how much.

A mathematical model can make **quantitative** predictions. A **rate equation** is a mathematical model. (This is *different* from the chemical equation for the reaction).

What is the relationship between rate and the concentration of acid in the reaction with marble chips?



Explain: Use slide 6 to explain to students that what we need is a mathematical model of rate – a rate equation.

Task: Questions:

- What is the relationship between rate and concentration of acid?
- As concentration increases, the rate increases ... but by how much?

At this level students will come across three different mathematical relationships between concentration and rate.

Slides 7–13

A mathematical model

The rate could be proportional to the concentration of acid:

$$r_{\text{HCl}} \propto [\text{HCl}]$$

or

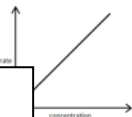
$$r_{\text{HCl}} = k[\text{HCl}]$$

r_{HCl} = rate of change of concentration of HCl
 k = a constant (the rate constant)
[HCl] = concentration of HCl (mol dm⁻³)
If this was the mathematical relationship, what would the graph look like?

A mathematical model

$$r_{\text{HCl}} = k[\text{HCl}]$$

If the rate is proportional to the concentration of acid...



A mathematical model

The rate could be proportional to the square of the concentration of acid:

$$r_{\text{HCl}} \propto [\text{HCl}]^2$$

or

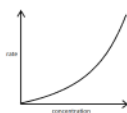
$$r_{\text{HCl}} = k[\text{HCl}]^2$$

If this was the mathematical relationship, what would the graph look like?

A mathematical model

$$r_{\text{HCl}} = k[\text{HCl}]^2$$

If the rate is proportional to the square of the concentration of acid... look like this.



A mathematical model

Maybe the rate is constant and is not affected the concentration of acid at all:

$$r_{\text{HCl}} = k$$

or

$$r_{\text{HCl}} = k[\text{HCl}]^0$$

If this was the mathematical relationship, what would the graph look like?

A mathematical model

$$r_{\text{HCl}} = k$$

If the rate is constant, and does not depend on concentration, the graph would look like this.



Rate and concentration

So there are three possible models:

$r_{\text{HCl}} = k$ This is called zero order ([HCl]⁰)

$r_{\text{HCl}} = k[\text{HCl}]$ This is called first order ([HCl]¹)

$r_{\text{HCl}} = k[\text{HCl}]^2$ This is called second order ([HCl]²)

To find the order of reaction for marble and acid we need to collect some data ...



Task: Use slides 7–13 to introduce the three possible models to students.

Ensure that students understand the new terms and symbols: rate equation, proportional (\propto), rate constant (k), and square brackets [] for concentration.



The effect of concentration on rate – Teacher guidance

Slides 14–16

Rate and concentration

So, how can you measure...

Rate cannot be measured

- Time
- Concentration
- Volume of gas
- Change in mass

Rate and concentration

Rate of change of concentration cannot be measured directly.

It can be found by analysing measurements of concentration over time.


How fast is the concentration falling

Here are the concentration–time graphs for two different reactions.

For each graph decide whether the rate is:

- zero order: $r_A = k$
- first order: $r_A = k[A]$
- second order: $r_A = k[A]^2$

Explain your decision.



Task: Using the first page of the **Student sheet** and **slides 14–16**, students work in small groups to decide what the two concentration–time graphs show. They discuss for 5 minutes and then feed back.

They should come to the conclusion that Graph 1 is zero order, and in Graph 2 the rate is dependent on concentration; however, they are unlikely to be sure whether it is first or second order. One way to decide is to find the half life.

Slides 17–18

Graph 1

At any concentration the gradient of the graph is the same.

So the rate of reaction is always the same.

The rate is not affected by the concentration.

The rate equation is $r_A = k$


Graph 2

As the concentration decreases the gradient and therefore the rate of reaction also decreases.

The rate is affected by the concentration.

The rate equation could be

$$r_A = k[A] \quad \text{or} \quad r_A = k[A]^2$$



Task: Use **slides 17–18** to show how to analyse the graphs.

Interactive



Practical work for learning

The effect of concentration on reaction rate



How do we work out the order of a reaction?

© Nuffield Foundation 2013

Summary

Differentiation: For students already confident in finding half life from a graph, the interactive can be omitted.

Task: Students work in their groups to find the half life for Graph 2, and confirm that it is first order.



The effect of concentration on rate – Teacher guidance

Slide 19

Problem

For this reaction, what is the rate equation?



You cannot measure the concentration of hydrochloric acid directly. What could you measure instead?

We can measure something directly proportional to concentration: volume of gas collected, or change in mass.

To do

- Carry out the experiment.
- Draw graphs of the results to find out the rate equation.



© Nuffield Foundation 2013

Task: Present the problem given on **slide 19**. Students follow method 1 or 2 on the **Student sheet** to follow the reaction between calcium carbonate and hydrochloric acid (see **Practical guidance**).

The practical work is relatively straightforward and should not take too long.

Students draw graphs of their results (concentration against time). They may need advice on the choice of sensible scales, and may need reminding to label axes and to give units in a conventional way.

If students decide that they need to repeat their work to generate more data they are likely to get quite different results. This is fine as long as they are plotted as separate lines on the graphs. What is critical here is the shape of the graph.

Practical

Slide 20

The reaction of marble chips with hydrochloric acid is **first order** with respect to hydrochloric acid.

$$r_{\text{HCl}} = k[\text{HCl}]$$

Orders of reaction are experimental quantities.

They cannot be deduced from the chemical equation for the reaction.

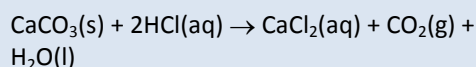


© Nuffield Foundation 2013

Task: Students compare the shape of their graphs with those on the **Student sheet** page 1 to see which matches most closely. Students' graphs will be curved, so they should find the half life to determine whether the reaction is first or second order with respect to hydrochloric acid.

Task: Students should be able to describe that the rate of the reaction is proportional to the concentration of the hydrochloric acid (**slide 20**).

They may be surprised to find that it is not second order. Many will expect it to be because 2 moles of hydrochloric acid appear in the stoichiometric equation:



This is a good place to emphasise that the order of a reaction is an experimental quantity and cannot be deduced from the equation.



The effect of concentration on rate – Teacher guidance

Slides 21–23

Rate equations

For a reaction in solution: $A(aq) + B(aq) \rightarrow \text{products}$

You could find the rate of change of concentration of A (r_A) by measuring the concentration of A over time.

You could find the rate of change of concentration of B (r_B) by measuring the concentration of B over time. r_A and r_B might have different values.

It is important to state which substance the rate refers to when talking about rate.

Rate equations

A rate equation can be used to describe the rate of change of concentration of substance A:

$$r_A = k[A]^m[B]^n$$

The indices m and n tell you the 'order of reaction' with respect to reactant A' and reactant B'.

m and n can be zero, first or second order.

Order of reaction: zero order

In a zero order reaction, $m = 0$.

The rate equation is: $r_A = k[A]^0$ or $r_A = k$.

What would the data look like if you plotted $[A]$ against time for this reaction?

Explain: Once the rate equation has been found by experiment, it can be used as a model to make quantitative predictions for that reaction.

Explain: Rate equations can be written for any reaction. Use slides 21–23 to explain that the rate equation relates to the rate of change of concentration of one named substance taking part in the reaction. It is important to state to which substance the rate refers to in a rate equation. Ensure students understand the term 'order of reaction'.

Question: Why is the rate equation not $r_{\text{HCl}} = k[\text{HCl}]^m[\text{CaCO}_3]^n$?

Task: Ask students: Why is the rate equation not $r_{\text{HCl}} = k[\text{HCl}]^m[\text{CaCO}_3]^n$?

Slides 24–28

Card sort

Card sort

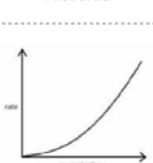
To do

Cut out the cards below and arrange into three groups; zero order, first order and second order reactions.

Zero order



First order



Second order

The rate is proportional to the concentration of a reactant. When you double the concentration the rate doubles.

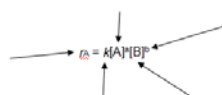
Explain: Slides 24–28 could be used to review the different orders of reaction, and the card sort activity on the **Student sheet** can be used to reinforce understanding.

The calcium carbonate is a solid so it does not have a concentration. The rate will change with a change in surface area. However, if an excess of fairly large pieces are used, the surface area will not change appreciably during the reaction.

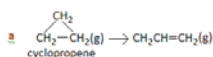
Student sheet

The effect of concentration on rate: Assessing learning

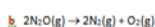
1 Label the following equation as fully as you can.



2 Information about the effect of changes of concentration on the rates of some reactions is given below. For each example, use the information to write the rate equation for the reaction.



The rate is proportional to the concentration of cyclopropene.



The rate is proportional to the concentration of nitrogen(I) oxide.

Homework: Students work through the assessment question, Q4 on the **Student sheet**. They may need help to realise that they don't need to draw a graph of the data.

This question is set in a different context, in a reaction which has three reactants. Students have to look at the change in initial concentrations and compare this to the change in initial rates to deduce the order of the reaction with respect to each reactant. They can then deduce the rate equation for the reaction.

Differentiation: Some students may need a little guidance at first as to what to look for as the results are not presented on a graph.



The effect of concentration on rate – Teacher guidance

Student sheet: Answers

- 1 The rate increases as the concentration of hydrochloric acid increases.
- 2 The graph is most similar to the first order graph. By calculating the half life it can be shown that it is indeed first order with respect to hydrochloric acid.
- 3 Answers will depend on the quality of the evidence collected.
- 4 No, it is not possible to predict the order of the reaction from the chemical equation. The order of reaction is an experimental quantity which must be measured.
- 5 The rate equation is: $r_{\text{HCl}} = k[\text{HCl}]$

Assessing learning: Answers

- 1 Diagram labelled with:

r_A = rate of reaction with respect to A

k = rate constant

[A] = concentration of A

[B] = concentration of B

n = order of reaction with respect to B

2a Rate = $k[\text{cyclopropane}(\text{g})]$

b Rate = $k[\text{N}_2\text{O}(\text{g})]$

c Rate = $k[\text{H}_2(\text{g})][\text{I}_2(\text{g})]$

d Rate = $k[\text{HI}(\text{g})]^2$

e Rate = $k[\text{C}_{12}\text{H}_{22}\text{O}_{11}][\text{H}^+]$

3a First order with respect to $\text{CH}_3\text{CH}_2\text{Br}$. Zero order with respect to OH^- .

Doubling the concentration of hydroxide ions would have no effect on the rate.

b First order with respect to $\text{CH}_3\cdot$, first order with respect to Cl_2 .

Doubling the concentration of methyl radicals and the chlorine gas would increase the rate by four times.

4a First order with respect to H_2O_2 ; rate is doubled if $[\text{H}_2\text{O}_2]$ doubled, rate trebled if $[\text{H}_2\text{O}_2]$ trebled.

b First order with respect to I^- ; rate is doubled if $[\text{I}^-]$ doubled.



The effect of concentration on rate – Teacher guidance

c Zero order with respect to H^+ ; rate unchanged if $[\text{H}^+]$ doubled.

d Rate = $k[\text{H}_2\text{O}_2][\text{I}^-]$



The effect of concentration on rate – Practical guidance

The teacher demonstration is used at the start of the lesson to remind students of the familiar reaction:



In the class practical, students collect data to find the order of the reaction with respect to hydrochloric acid.

Students follow one of the two methods provided. Which one you use will depend on the apparatus available.

Equipment and materials

Teacher demonstration

Eye protection

Marble, small acid washed chips, 0.5–1 g each, 10 g

Hydrochloric acid (1 M), 50 cm³

Beaker (250 cm³)

Class practical: Method 1

Using a conical flask and a balance

Eye protection

per group/pair

Marble, acid washed chips, 1–1.5 g each, 10 g

Hydrochloric acid (1 M), 20 cm³

Cotton wool

Measuring cylinder (25 cm³)

Conical flask (100 cm³)

Balance to weigh to +/- 0.001 g

Stopclock

Class practical: Method 2

Using a side-arm test tube and a gas syringe

Eye protection

per group/pair

Marble, as in method 1

Hydrochloric acid (1 M), 10 cm³

Measuring cylinder (10 cm³)

Test tube with side arm, 150 x 25 mm, or equivalent

Glass gas syringe (100 cm³)

Rubber stopper to fit test tube

Rubber connecting tubing

Stopclock

Health and Safety and technical notes

Before carrying out this practical, users are reminded that it is their responsibility to carry out a risk assessment in accordance with their employer's requirements, making use of up-to-date information.

[Read our standard health & safety guidance.](#)

1 The marble chips should be washed briefly in dilute hydrochloric acid to remove any surface powder. They should then be rinsed in pure water and allowed to dry at room temperature.

2 Take great care handling the gas syringes.

Procedure

Demonstration

Wear eye protection

1 Add 50 cm³ of 1 M hydrochloric acid to a 250 cm³ beaker, and drop in a few marble chips. Students should observe the bubbles forming on the surface of the marble chips.

Class practical: Method 1 Using a conical flask and a balance

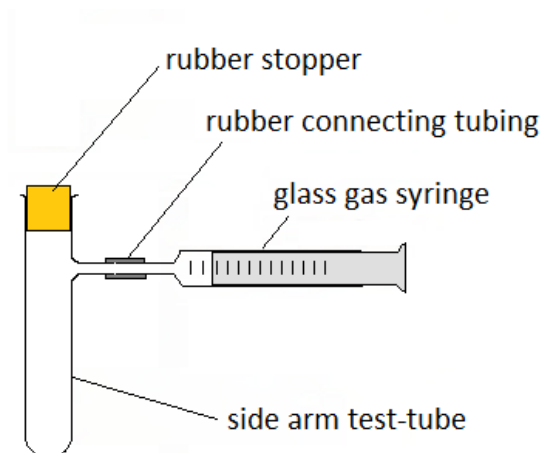
Wear eye protection.

- 1 Put the following items on the pan of a direct-reading, top-pan balance:
small conical flask containing about 10 g of marble in six or seven lumps.
measuring cylinder containing 20 cm³ of 1 M hydrochloric acid.
plug of cotton wool for the top of the conical flask.
- 2 Adjust the balance so that it is ready to weigh all these items.
- 3 Pour the acid into the conical flask, plug the top with the cotton wool, and replace the measuring cylinder on the balance pan.
- 4 Allow a few seconds to pass so that the solution is saturated with carbon dioxide; then start timing and taking mass readings. Record in a table the mass of the whole reaction mixture and apparatus at intervals of 30 seconds until the reaction is over and the mass no longer changes.
- 5 Complete the table by carrying out the calculations as described in the Student sheet and plot a graph of the results.

Class practical: Method 2 Using a side-arm test tube and a gas syringe

Wear eye protection

- 1 Set up the apparatus as shown in the diagram.
- 2 Remove the stopper and place about 10 g of marble in six or seven lumps in the test tube.
- 3 Use a measuring cylinder to measure 10 cm³ of 1 M hydrochloric acid.
- 4 Put the acid into the test tube and allow a few seconds for the solution to become saturated with carbon dioxide. Then, replace the stopper and start timing.
- 5 Take readings of volume every 30 seconds until the reaction is over and the volume no longer changes. Record the results in a table.



Teaching notes

Fairly large pieces of marble are used so that the surface area does not change appreciably during the reaction.

On the other hand the hydrochloric acid is arranged to be in such quantity and concentration that it is almost all used up during the reaction.

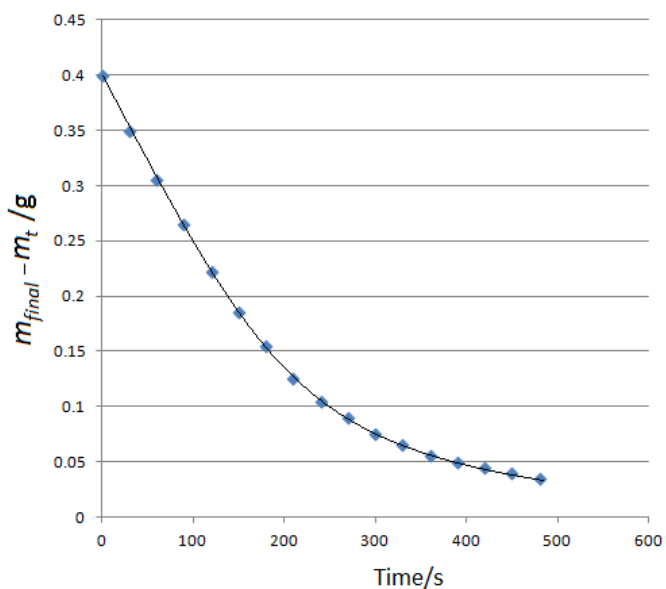
For both Methods 1 and 2 it is important that the acid is saturated with

carbon dioxide before readings are begun.

In Method 2 the maximum volume of carbon dioxide obtainable from 10 cm³ of 1 M hydrochloric acid is about 120 cm³. Therefore the timing must not be started too early or the syringe will be overfilled.

Sample results are shown below.

Method 1 Using a conical flask and a balance



Method 2 Using a side-arm test tube and a gas syringe

